

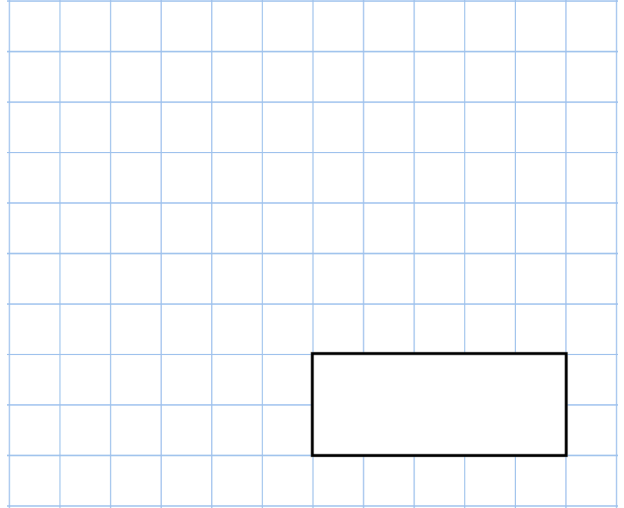


20th June

$$0.4 \times 400$$

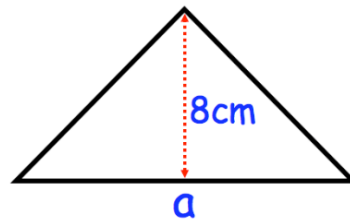


$$1\frac{1}{3} - \frac{2}{5}$$

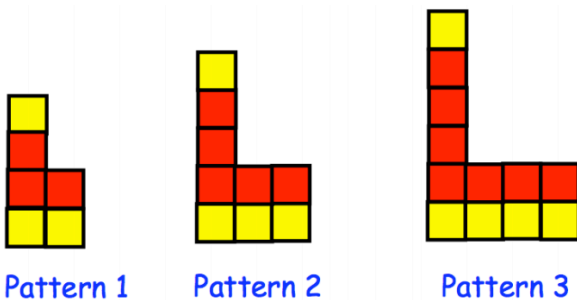


The area of this triangle is 52cm^2

Find a



Here is a pattern of red and yellow squares



Pattern 1

Pattern 2

Pattern 3

Which of the following are false?

- A Pattern 10 has 12 yellow squares
- B The number of red squares is always odd
- C Every pattern has more red squares than yellow squares
- D Pattern 4 has 9 red squares