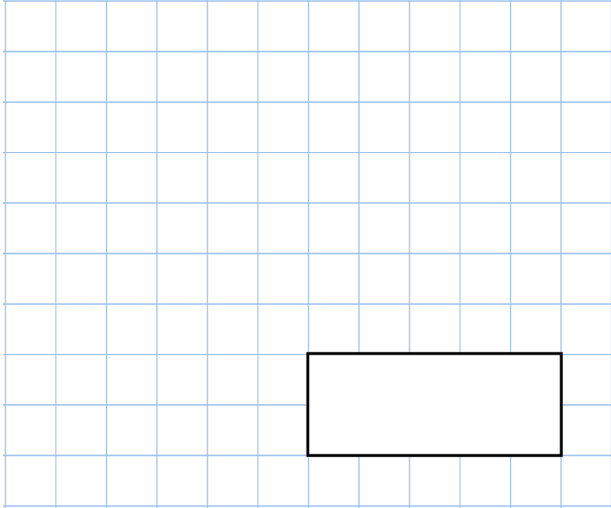
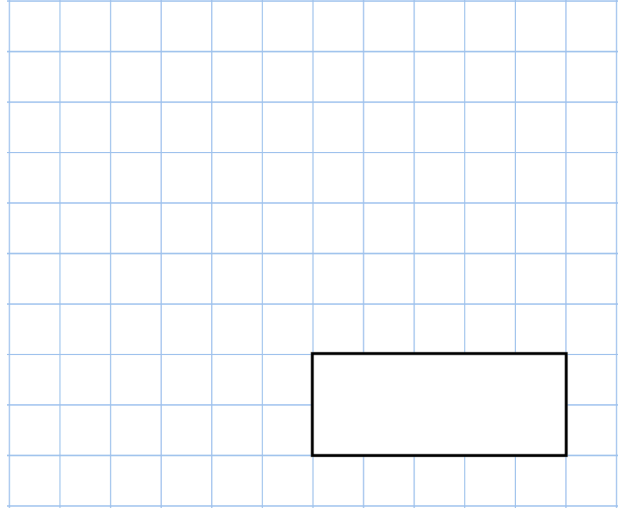


**14th August**

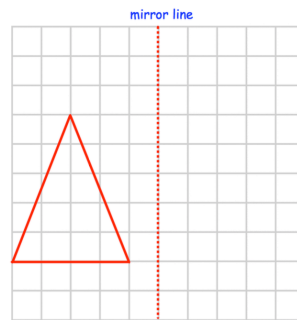
$$1 \times 3 \times 5 \times 7 \times 9$$



$$60,000 \div 10$$



Reflect the triangle in the mirror line



This pictogram shows how much time Peter spent revising last week.

How much time did Peter spend revising in total?

Key ○ = 2 hours

|           |       |
|-----------|-------|
| Monday    | ○ ○   |
| Tuesday   | ○ ○ ○ |
| Wednesday | ○ ◐   |
| Thursday  | ○ ○   |

The temperature in Sheffield is 4°C.

The temperature in Mansfield is 9°C colder.

What is the temperature in Mansfield?