



28th July

$750 \div 10$

$6.6 + 4.8$

Match each measurement to the type of angle.

180°

Reflex angle

79°

Acute angle

90°

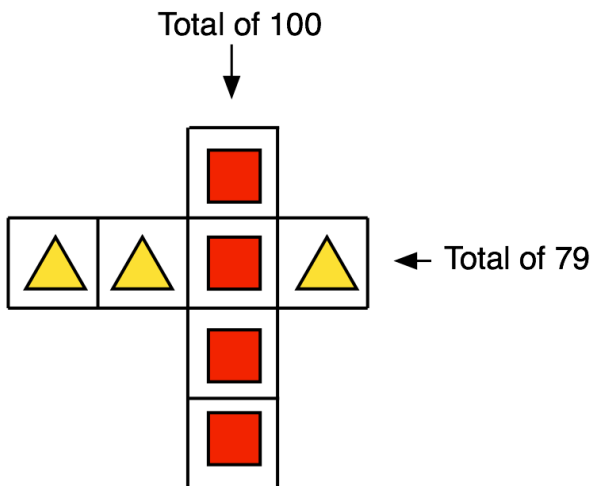
Straight line

198°


Right angle


94°

Obtuse angle



Each shape stands for a number
Work out the value of each shape

 = _____

 = _____