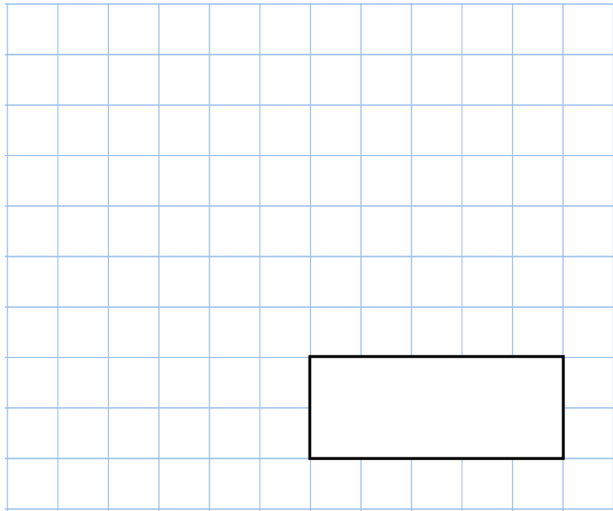


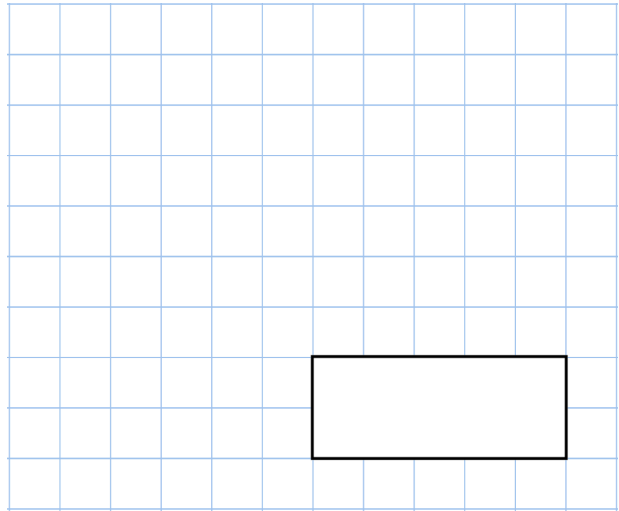


8th June

$160 + 150 + 140$



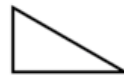
$1,800 - 440$



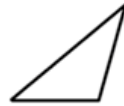
Match each triangle to the correct name

Triangle

Name



Isosceles



Right angled



Equilateral



Scalene

Rosie cuts **5 metres** of ribbon into **four** pieces.

The length of the first piece was 0.9m  
The length of the second piece was 1.5m  
The length of the third piece was 2.2m

Work out the length of the fourth piece