



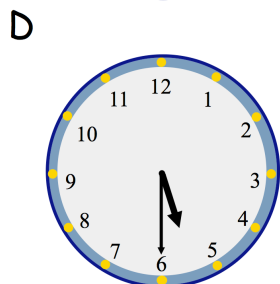
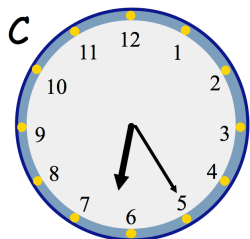
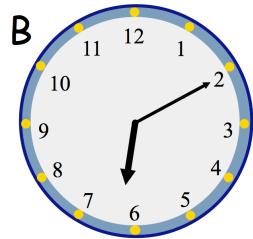
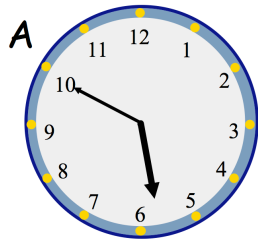
1st March

$3,232 + 800$

7×56

--

--



Which clock shows 17:30?

Which clock shows 18:25?

Beth runs 200m on Monday, Tuesday, Wednesday, Thursday and Friday.

How far has she run in total?

Give your answer in kilometres