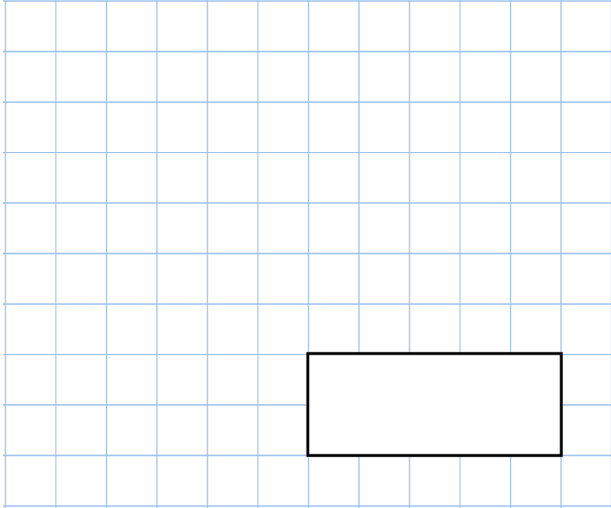
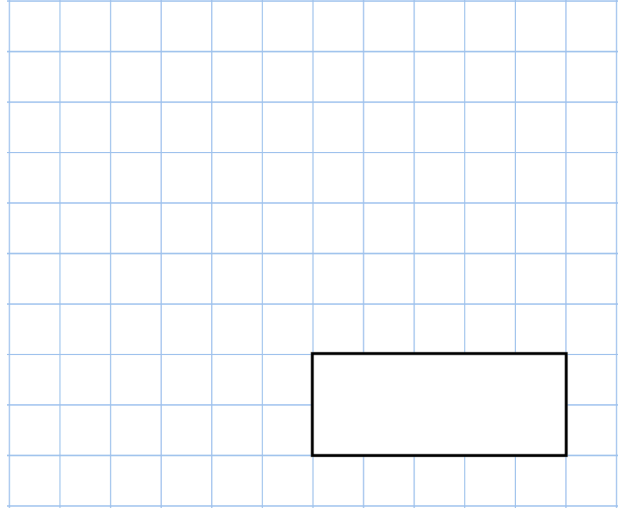


**20th September**

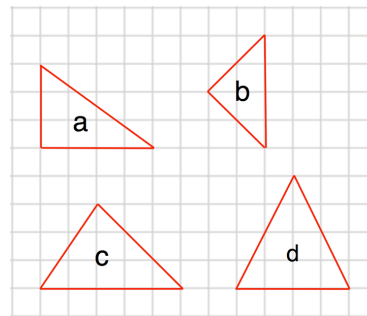
$$1,260 - 409$$



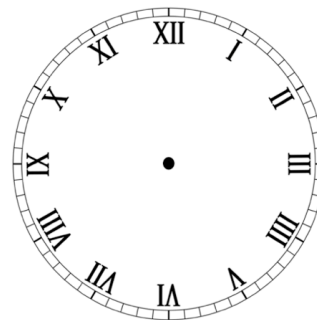
$$\frac{4}{5} \text{ of } 20$$



Which triangle is a right-angled triangle?



Show the time 8:15am on the clock



Write the three missing digits to make this subtraction correct.

$$\begin{array}{r} 5 \quad \square \quad 7 \\ - \square \quad 8 \quad \square \\ \hline 2 \quad 4 \quad 3 \end{array}$$