







16th December

$$\frac{1}{4} \text{ of } 24$$

$$63 + 18$$

11 $\xrightarrow{\text{is 38 less than}}$ 49

$\xrightarrow{\text{is 38 less than}}$ 75

A  £315	B  £303
C  £199	D  £330

Put the prices of these sheds in order, starting with the highest.

Menu

- Coffee £1.60
- Tea £1.00
- Scone £2.00
- Biscuit £0.80

Alex buys a **tea** and a **biscuit**.
She pays £2

How much change does she get?