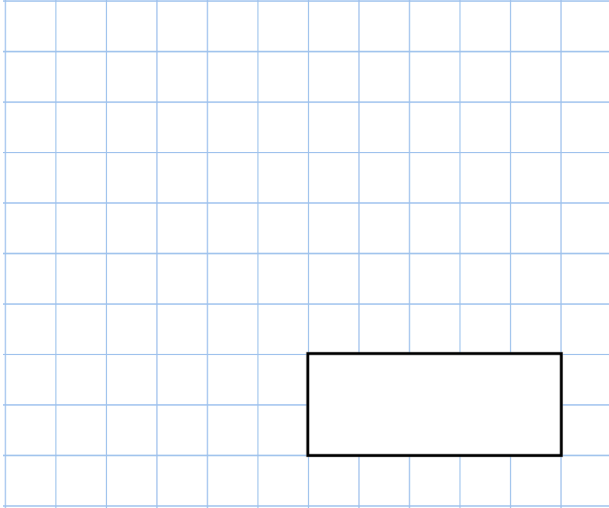


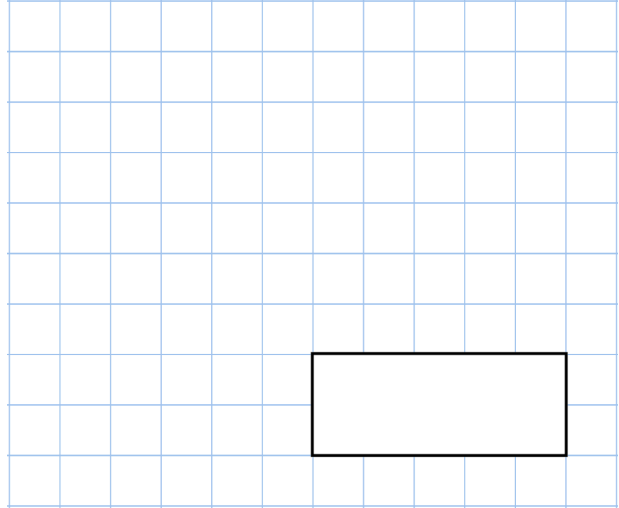


17th September

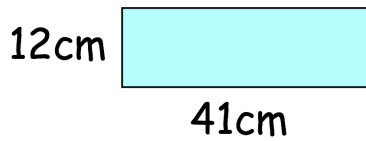
$$5,040 \times 1,000$$



$$0.8 \times 9$$

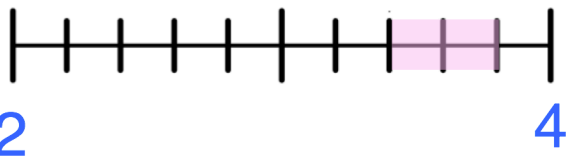
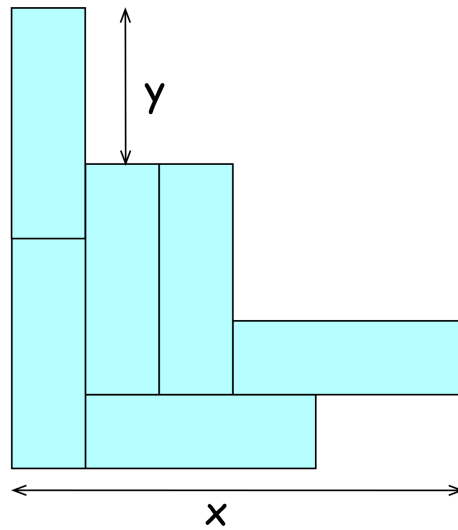


Phoebe has some rectangles.
They each measure 41cm by 12cm



She makes this design with six of the rectangles.

Work out the lengths of x and y.



Circle all the numbers below that belong in the shaded part of the number line.

- $3\frac{1}{2}$
- $3\frac{3}{10}$
- $3\frac{1}{4}$
- $3\frac{1}{3}$
- $3\frac{3}{5}$