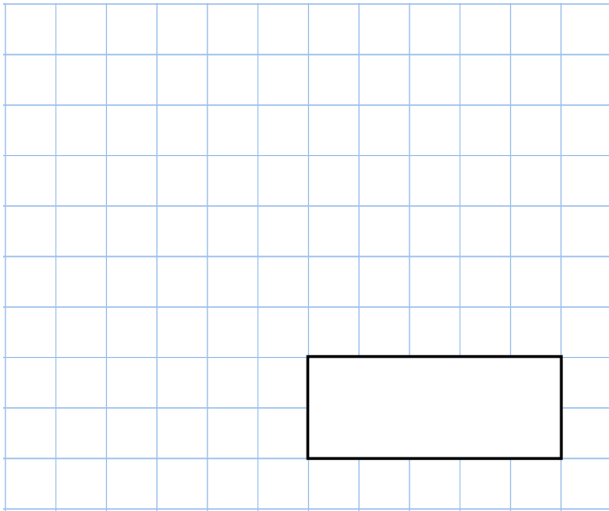


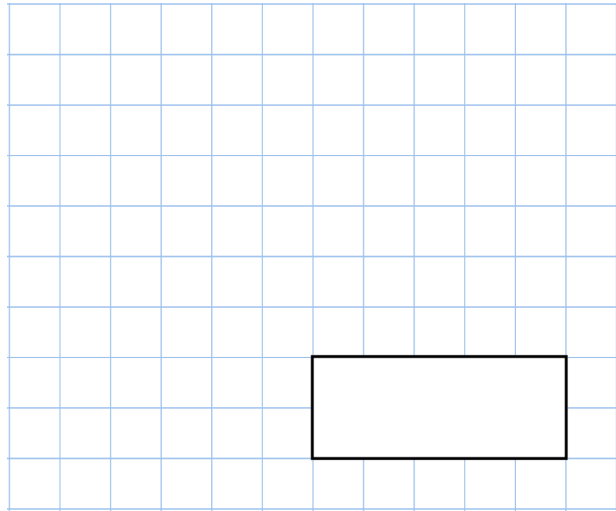


21st September

$$156 \times 12$$



$$\frac{1}{4} + \frac{1}{8} + \frac{3}{16}$$



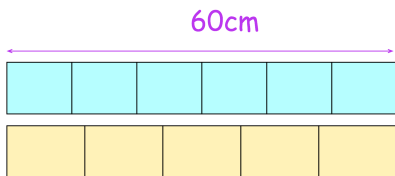
The cost of hiring a school hall is found by

$$\boxed{\text{£}35 \times \text{number of hours}}$$

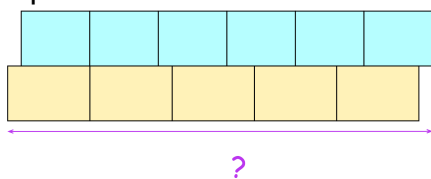
Carlo hired the hall and the total cost was £280

How long did Carlo hire the hall for?

Sian has two strips of paper.  
Each strip is 60cm long.  
One strip is divided into six equal parts  
and the other is divided into five equal parts.



Sian uses the two strips to make this shape



What is the total length of Sian's shape?