




Primary Practice Questions



Corbettmaths



Negative Numbers



Tips

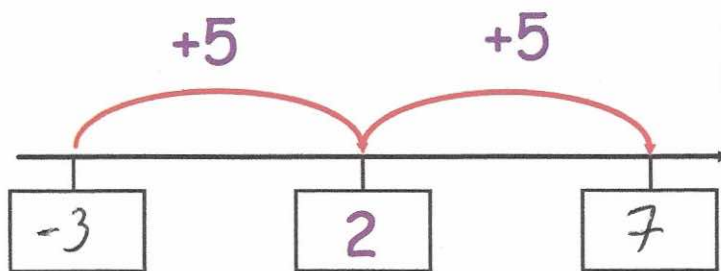
- Read each question carefully
- Attempt every question.
- Check your answers seem right.
- Always show your workings

Recap

Remember


- There are daily questions found at
www.corbettmaths.com/5-a-day/primary

1. Here is part of a number line



Write the missing numbers in the boxes

2. The thermometer below shows the temperature at 6am in a town



What temperature is shown?

-3 °C

The temperature increases by 7°C by 10am

What is the temperature at 10am?

4 °C

3. These are the temperatures in towns cities on the same day.

Towns	Temperature
Leek	-8°C
Milton	12°C
Donhampton	-11°C
Redtown	7°C
Sandville	-16°C

Which town has the highest temperature?

Milton

Which town has the lowest temperature?

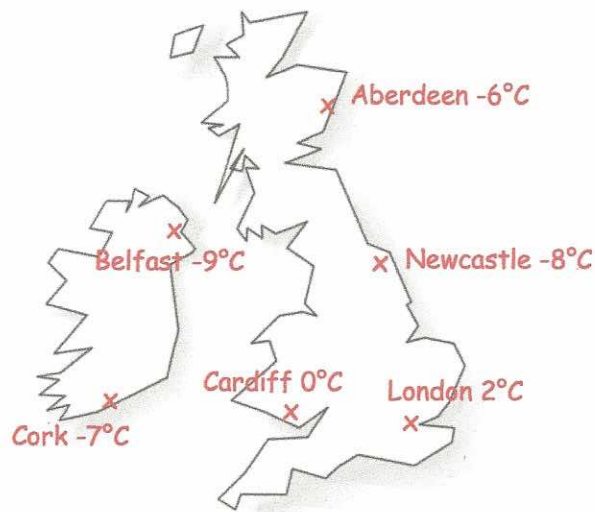
Sandville

The temperature in Watford is 9°C colder than Redtown

What is the temperature in Watford?

-2°C

4. The map shows the temperature in six cities



Which city is the warmest?

London

Which city is the coldest?

Belfast

What is the difference in temperature between London and Aberdeen?

8 °C

5. The table shows information about the minimum and maximum temperature for a day in January.

City	Minimum °C	Maximum °C
Glasgow	-6°C	9°C
Bristol	4°C	14°C
Norwich	-7°C	7°C
Hull	-1°C	10°C
Derby	5°C	11°C
Lisburn		-2°C

The minimum temperature in Lisburn is 1°C colder than its maximum temperature.

What was Lisburn's minimum temperature?

-3 °C

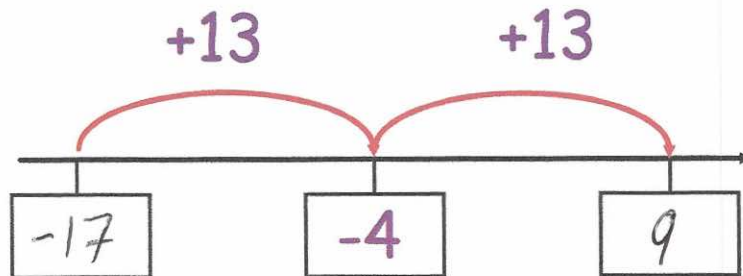
Which city had the greatest maximum temperature?

Bristol

Which city had the lowest minimum temperature?

Norwich

6. Here is part of a number line



Write the missing numbers in the boxes

7. Shown below is a list of cities and their elevations.

	Location	Elevation
*	Georgetown	-2 metres
	Amsterdam	-1 metre
	Paris	34 metres
	New Orleans	-2 metres
	Salton City	-38 metres
‡	Dublin	8 metres

Which city has the lowest elevation?

Salton City

Work out the difference in Georgetown's and Dublin's elevation?

10 metres

8. This graph shows the temperature in four cities on one day in March.



What was the temperature in Leeds?

8 °C

How much warmer is the temperature in Bath than Bangor?

6 °C

9. Sian thinks of two different numbers

The two numbers have a **total** of 3

The same numbers have a **difference** of 5

What two numbers did Sian think of?

$$-1 + 4 = 3$$

-1

4