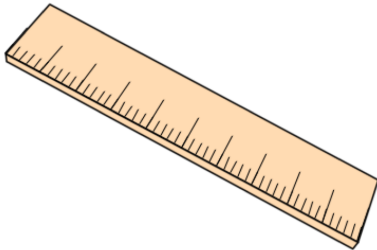


Primary Practice Questions



Corbettmaths



Negative Numbers



Tips

- Read each question carefully
- Attempt every question.
- Check your answers seem right.
- Always show your workings

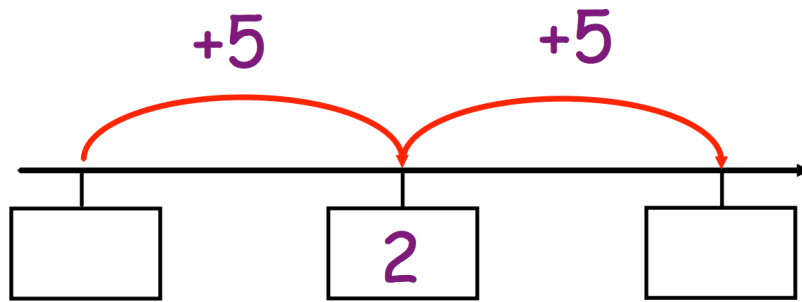
Recap



Remember

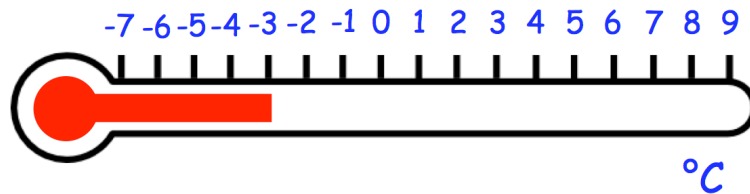
- There are daily questions found at
www.corbettmathsprimary.com/5-a-day/

1. Here is part of a number line



Write the missing numbers in the boxes

2. The thermometer below shows the temperature at 6am in a town



What temperature is shown?

 °C

The temperature increases by 7°C by 10am

What is the temperature at 10am?

 °C

3. These are the temperatures in towns cities on the same day.

| Towns | Temperature |
|------------|-------------|
| Leek | -8°C |
| Milton | 12°C |
| Donhampton | -11°C |
| Redtown | 7°C |
| Sandville | -16°C |

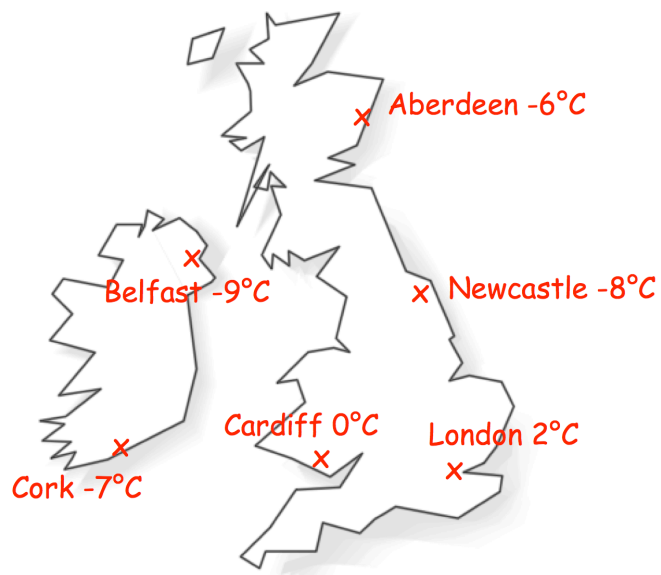
Which town has the highest temperature?

Which town has the lowest temperature?

The temperature in Watford is 9°C colder than Redtown

What is the temperature in Watford?

4. The map shows the temperature in six cities



Which city is the warmest?

Which city is the coldest?

What is the difference in temperature between London and Aberdeen?

5. The table shows information about the minimum and maximum temperature for a day in January.

| City | Minimum °C | Maximum °C |
|---------|------------|------------|
| Glasgow | -6°C | 9°C |
| Bristol | 4°C | 14°C |
| Norwich | -7°C | 7°C |
| Hull | -1°C | 10°C |
| Derby | 5°C | 11°C |
| Lisburn | | -2°C |

The minimum temperature in Lisburn is 1°C colder than its maximum temperature.

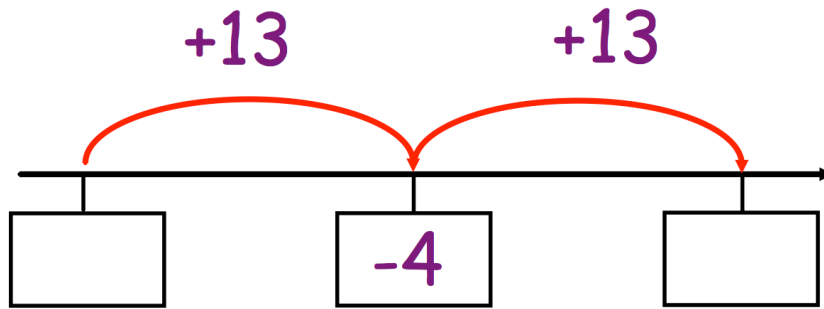
What was Lisburn's minimum temperature?

°C

Which city had the greatest maximum temperature?

Which city had the lowest minimum temperature?

6. Here is part of a number line



Write the missing numbers in the boxes

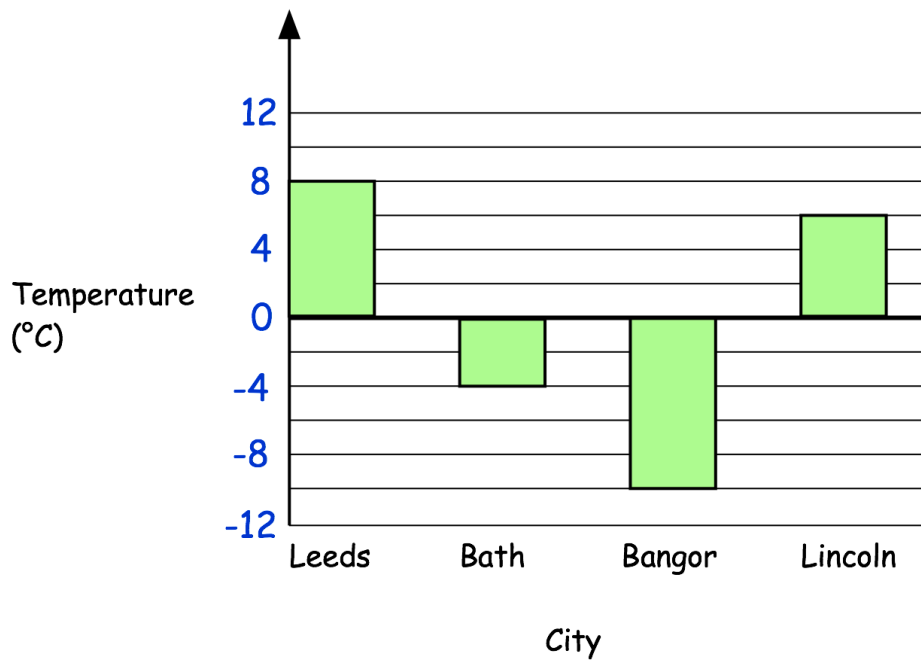
7. Shown below is a list of cities and their elevations.

| Location | Elevation |
|-------------|------------|
| Georgetown | -2 metres |
| Amsterdam | -1 metre |
| Paris | 34 metres |
| New Orleans | -2 metres |
| Salton City | -38 metres |
| Dublin | 8 metres |

Which city has the lowest elevation?

Work out the difference in Georgetown's and Dublin's elevation?

8. This graph shows the temperature in four cities on one day in March.



What was the temperature in Leeds?

 °C

How much warmer is the temperature in Bath than Bangor?

 °C

9. Sian thinks of two different numbers

The two numbers have a **total** of 3

The same numbers have a **difference** of 5

What two numbers did Sian think of?