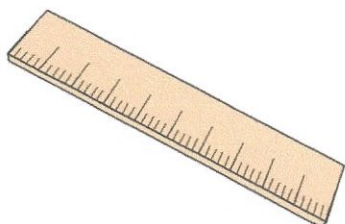



Primary Practice Questions



Corbettmaths



Subtraction



Tips

- Read each question carefully
- Attempt every question.
- Check your answers seem right.
- Always show your workings

Recap



Remember

- There are daily questions found at
www.corbettmaths.com/5-a-day/primary

1. 78 - 51

$$\begin{array}{r} 78 \\ - 51 \\ \hline 27 \end{array}$$

27

2. 72 - 16

$$\begin{array}{r} 6 \\ 72 \\ - 16 \\ \hline 56 \end{array}$$

56

3. 90 - 23

$$\begin{array}{r} 8 \\ 90 \\ - 23 \\ \hline 67 \end{array}$$

67

4.

580 - 149

$$\begin{array}{r}
 7 \\
 5 \overset{1}{0} \\
 - 149 \\
 \hline
 431
 \end{array}$$

431

5.

245 - 82

$$\begin{array}{r}
 1 \\
 \cancel{2} \overset{1}{4} 5 \\
 - 82 \\
 \hline
 163
 \end{array}$$

163

6.

838 - 159

$$\begin{array}{r}
 7 \\
 \cancel{8} \overset{2}{\cancel{3}} \overset{1}{8} \\
 - 159 \\
 \hline
 679
 \end{array}$$

679

7.

$$900 - 663$$

$$\begin{array}{r} \cancel{8}^9 \cancel{0}^1 0 \\ - 663 \\ \hline 237 \end{array}$$

237

8.

$$2,512 - 740$$

$$\begin{array}{r} ^4 \\ \cancel{2}^1 \cancel{5}^1 1 2 \\ - 740 \\ \hline 1772 \end{array}$$

1772


9.

$$\boxed{} = 5,200 - 1,800$$

$$\begin{array}{r} \cancel{4}^5 \cancel{2}^1 0 0 \\ - 1800 \\ \hline 3400 \end{array}$$

3400

10. Chris buys an apple for 41p and a banana for 27p.



How much more does the apple cost than the banana?

$$\begin{array}{r} 3 \\ 41 \\ - 27 \\ \hline 14 \end{array}$$

14 p

11. Emma is 14 years old.
Her grandmother is 70 years old.

How many years younger is Emma than her grandmother?

$$\begin{array}{r} 6 \\ 70 \\ - 14 \\ \hline 56 \end{array}$$

56

12. Write the two missing digits to make this subtraction correct

$$\begin{array}{r} 9 \boxed{6} \\ - \boxed{4} 2 \\ \hline 54 \end{array}$$

13. Write the missing number

$$155 \xrightarrow{\text{is 40 more than}} 115$$

$$212 \xrightarrow{\text{is 40 more than}} \boxed{172}$$

$$\begin{array}{r} 212 \\ - 40 \\ \hline 172 \end{array}$$

14. Grayson has 58 marbles.
Mason has 312 marbles.

How many more marbles does Mason have than Grayson?

$$\begin{array}{r} ^2 ^1 ^1 \\ 312 \\ - 58 \\ \hline 254 \end{array}$$

254

-
15. Write the number six less than nine hundred and three

$$\begin{array}{r} 903 \\ - 6 \\ \hline 897 \end{array}$$

897

16. Work out the **difference** between 4,500 and 750

$$\begin{array}{r} 3 \quad 4 \quad 1 \\ 4800 \\ - 750 \\ \hline 3750 \end{array}$$

3,750

17. Aiden has £95
Riley has £26 less than Aiden.
Alice has £17 less than Riley.

How much money do they have in total?

$$\begin{array}{r} 95 \\ - 26 \\ \hline \pounds 69 \end{array} \text{ Riley}$$

$$\begin{array}{r} 69 \\ - 17 \\ \hline \pounds 52 \end{array} \text{ Alice}$$

$$\begin{array}{r} 95 \\ 69 \\ + 52 \\ \hline 216 \end{array}$$

£ 216

18. Write the three missing digits to make this subtraction correct

$$\begin{array}{r}
 5 \quad \boxed{2} \quad 7 \\
 - \boxed{2} \quad 8 \quad \boxed{4} \\
 \hline
 2 \quad 4 \quad 3
 \end{array}$$

19. This table shows the lengths of three rivers.

River	Length in kilometres
Nile	6,853
Thames	346
Mississippi	3,734

How much longer is the Nile than the combined lengths of the other two rivers?

$$\begin{array}{r}
 3734 \\
 + 346 \\
 \hline
 4080
 \end{array}$$

$$\begin{array}{r}
 6853 \\
 - 4080 \\
 \hline
 2773
 \end{array}$$

2773 ^{Km}
miles

20.

$$5,712 - 4,163$$

$$\begin{array}{r} ^6 ^0 ^1 ^2 \\ 5 \cancel{7} \cancel{1} 2 \\ - 4 \ 1 \ 6 \ 3 \\ \hline 1 \ 5 \ 4 \ 9 \end{array}$$

1,549

21.

$$28,805 - 6,129$$

$$\begin{array}{r} ^7 ^9 ^1 ^2 \\ 2 \ 8 \ \cancel{8} \ \cancel{0} \ 5 \\ - \ 6 \ 1 \ 2 \ 9 \\ \hline 2 \ 2 \ 6 \ 7 \ 6 \end{array}$$

22,676


22.

$$161,030 - 42,132$$

$$\begin{array}{r} ^5 ^0 ^9 ^2 ^1 ^2 \\ 1 \ \cancel{6} \ \cancel{1} \ \cancel{0} \ 3 \ 0 \\ - \ 4 \ 2 \ 1 \ 3 \ 2 \\ \hline 1 \ 1 \ 8 \ 8 \ 9 \ 8 \end{array}$$

118,898

23. At a football match, there are 7,194 United fans and 16,057 City fans.



How many more fans do City have?

$$\begin{array}{r} \overset{5}{1} \overset{9}{\cancel{6}} \overset{1}{\cancel{0}} 57 \\ - 7194 \\ \hline 8863 \end{array}$$

8,863

24. Grace is saving money for a new guitar.

The guitar costs £149.50

In January she saved £37.75

In February she saved £18.11

Work out how much more money Grace needs to save

$$\begin{array}{r} 37.75 \\ + 18.11 \\ \hline 55.86 \end{array}$$

$$\begin{array}{r} \overset{0}{1} \overset{8}{4} \overset{1}{9} \overset{1}{5} 0 \\ - 55.86 \\ \hline 93.64 \end{array}$$

£ 93.64

25. Write down the number fifty less than **one million**

$$1,000,000 - 50$$

999,950

26. Work out the **difference** between of 234,567 and 705,426

$$\begin{array}{r} \overset{6}{7} \overset{5}{0} \overset{4}{5} \overset{3}{4} \overset{2}{2} \overset{1}{6} \\ - 234567 \\ \hline 470859 \end{array}$$

470,859

27. This table shows the number of people living in various cities in England.

City	Population
* Brighton	273,369
Preston	190,687
* Birmingham	1,224,136
Telford	166,641

How many more people live in Birmingham than Brighton?

$$\begin{array}{r}
 \begin{array}{cccccccc}
 & 0 & 1 & 1 & 3 & 0 & 2 & 1 \\
 & \times & 2 & 2 & 4 & 1 & 3 & 6 \\
 - & & & & & & & & \\
 \hline
 & 9 & 5 & 0 & 7 & 6 & 7 & &
 \end{array}
 \end{array}$$

950,767