



14th January

$5 \times 6 \times 3$

$5 \times 6 = 30$   
 $30 \times 3 = 90$


90

$2000 - 30$

~~2000~~  
 $\begin{array}{r} 2000 \\ - 30 \\ \hline 1970 \end{array}$


1970

Name this shape



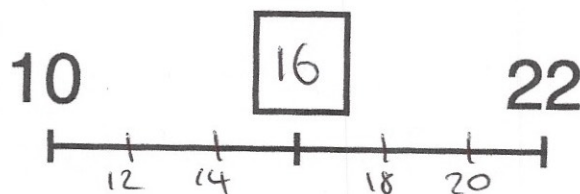
Hexagon

Name this shape



Right Angled Triangle

Find the number **halfway** between 10 and 22



- Chair    £70
- Sofa    £200
- Table   £250

Rebecca buys 2 chairs and a table

Work out the total cost

$\begin{array}{r} 250 \\ + 70 \\ + 70 \\ \hline 390 \end{array}$       £390