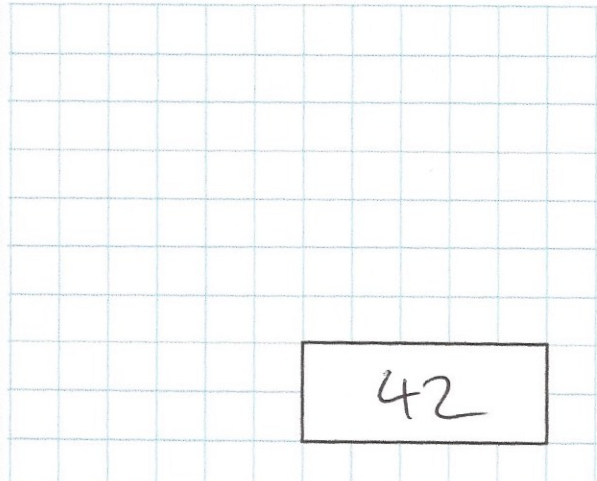


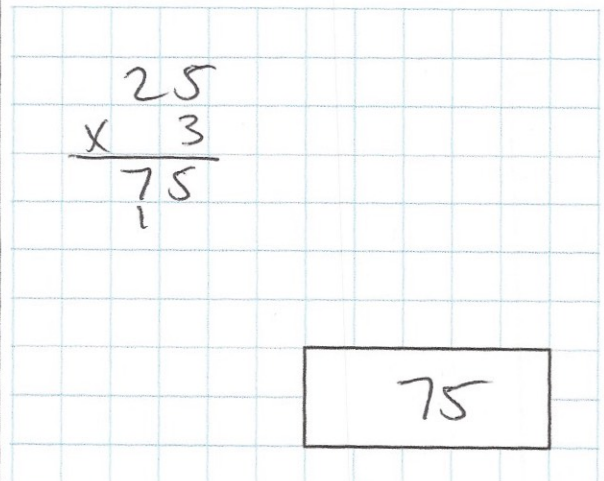
9th January

7×6



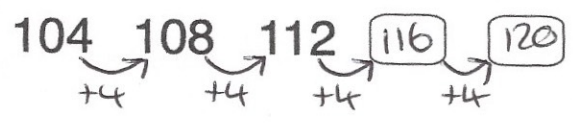
42

$\frac{1}{3}$ of 75 = 25



75

Find the two missing numbers



Emma buys a sandwich in a shop. She pays with a £5 note. She receives these coins in her change.



How much was the sandwich?

$$\begin{array}{r} 4.00 \\ - 1.40 \\ \hline 2.60 \end{array}$$

£2.60

Max has brought 60 bags of popcorn to sell at a school fair.

He sells 40 of them for £1 each £40

He sells the rest for £2 each £40

How much money did Max receive?

£80