



30th September

10×0


0

$$\begin{array}{r} 35 \\ 35 \\ + 35 \\ \hline 105 \\ 1 \end{array}$$

105


How many days are there in October?

31




How many edges does a cuboid have?

12



4 pens cost 52p



Find the cost of 1 pen

$$\begin{array}{r} 13 \\ 4 \overline{) 52} \\ \underline{40} \\ 12 \\ \underline{12} \\ 0 \end{array}$$

13p