



30th July

$7,291 + 620$

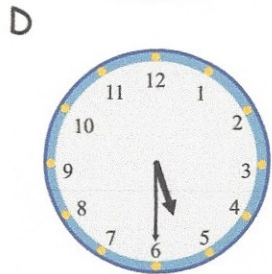
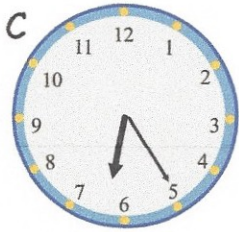

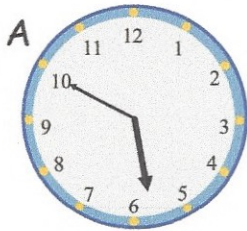
$$\begin{array}{r} 7291 \\ + 620 \\ \hline 7911 \end{array}$$

7911

8×48

$$\begin{array}{r} 48 \\ \times 8 \\ \hline 384 \end{array}$$

384



Which clock shows 18:10?

B

Which clock shows 17:50?

A

Beth runs 400m on Monday, Tuesday, Wednesday, Thursday and Friday.

How far has she run in total?

Give your answer in kilometres

2km