

Name: Answer

Primary 5-a-day

Silver



4th July

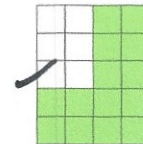
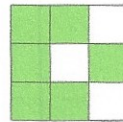
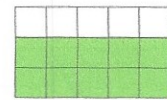
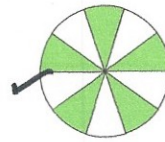
$7 - 10$

- 3

54×6

324

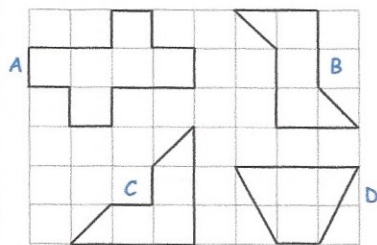
Tick the two shapes that are **not** $\frac{2}{3}$ shaded



In 2017 the 21st June was a Wednesday.

What day was the 4th July 2017?

Tuesday



Which two shapes have a line of symmetry?

C and D