



6th June

$$56.4 + 23.7$$

$$\begin{array}{r} 56.4 \\ 23.7 \\ \hline 80.1 \\ \text{.} \quad \text{.} \end{array}$$

80.1


$$8,073 - 605$$

$$\begin{array}{r} 78\overset{6}{0}7\overset{1}{3} \\ - 605 \\ \hline 7468 \end{array}$$

7468


Mia buys 3 large packets of card and 2 small packets of card.

Large



120 sheets of card

Small



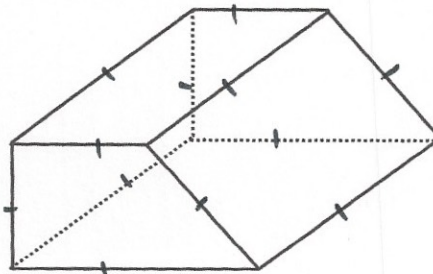
70 sheets of card

How many sheets of card did Mia buy altogether?

$$\begin{array}{r} 3 \times 120 = 360 \\ 2 \times 70 = 140 + \\ \hline 500 \end{array}$$

How many edges does this 3-D shape have?

12



Write the correct sign =, < or > in each circle

$$12 \times 11 \text{ ( < ) } 10 \times 14$$

$$120 \div 30 \text{ ( = ) } 8 \div 2$$

$$9 \times 50 \text{ ( > ) } 100 \times 4$$