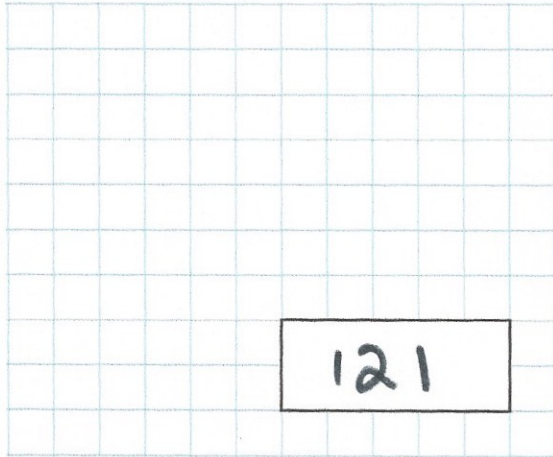




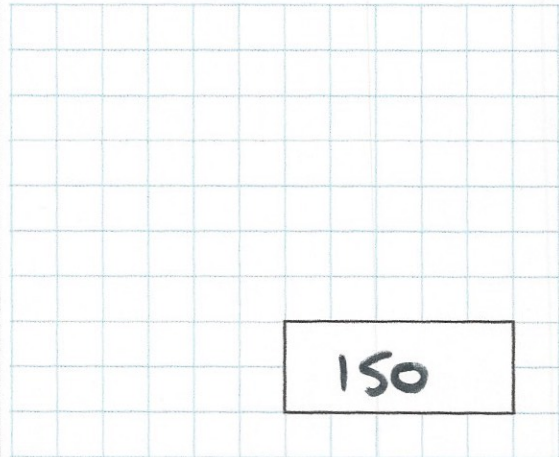
23rd May

11×11



121

$15,000 \div 100$



150

I think of a number.

I double the number and then double the result.


I then add 1.

My final answer is 29.

What number did I start with?

7

Draw any lines of symmetry on this road sign.



The perimeter of this rectangle is 30cm

Find the length of the rectangle

9cm

