

Name: Answers


Primary 5-a-day

Silver

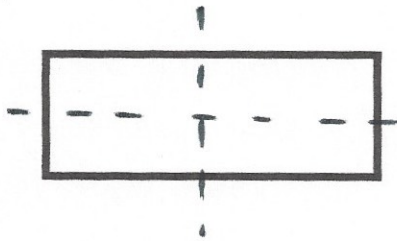
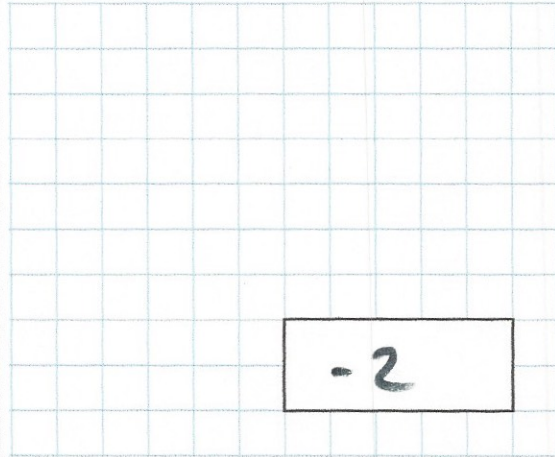


29th May

$64 \times 6$



$6 - 8$



On the rectangle, draw all the lines of symmetry

An assembly hall has 30 rows.  
Each row has 14 chairs.

During an assembly there are 45 seats empty.

Work out how many people went to the assembly

$30 \times 14 = 420$

$420 - 45 =$

$\underline{375}$

The point A has the coordinates (3, 2)

Plot the point A on the grid

