

Name: Answer

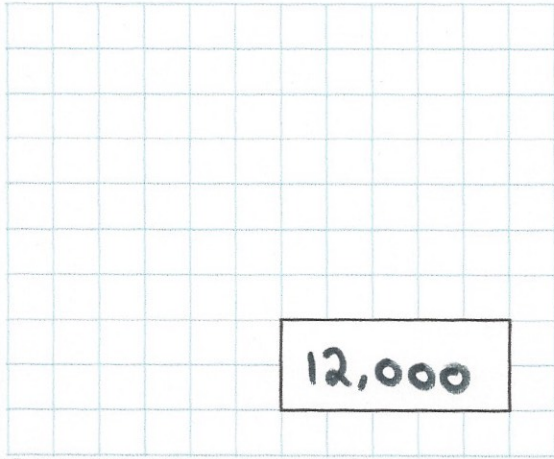
Primary 5-a-day

Silver

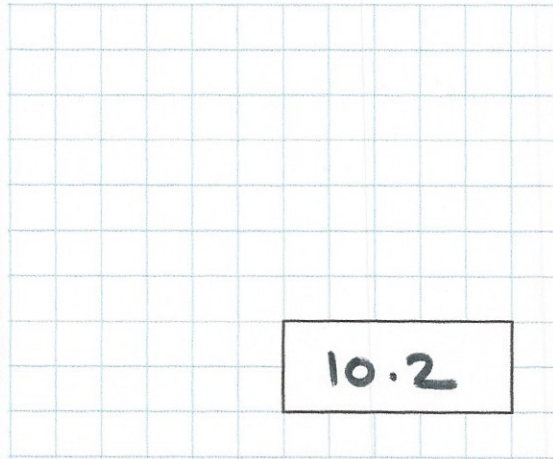


30th May

$1,000 \times 12$



$5.3 + 4.9$



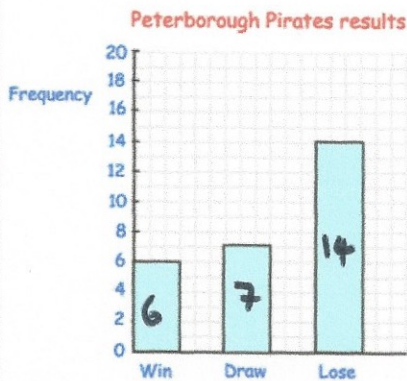
A journey lasts 119 days.
How many weeks is this?

17

$$\begin{array}{r} 17 \\ 7 \overline{) 119} \end{array}$$

Peterborough Pirates play in an ice hockey league. Each Win is worth 5 points, a draw is worth 1 point and a loss is worth 0 points.

The bar chart shows their results



How many matches did the Peterborough Pirates play?

27

How many points did the Peterborough Pirates finish with?

$6 \times 5 + 7 = 37$