




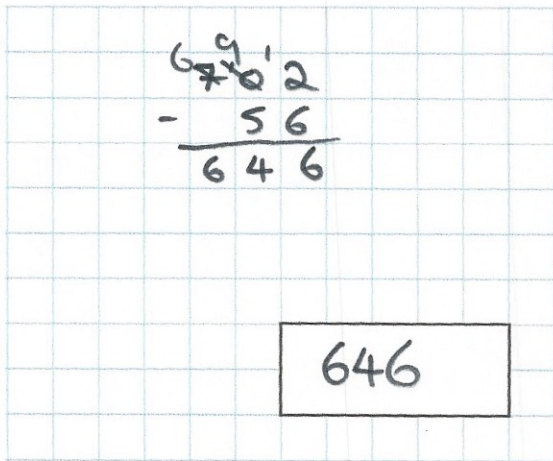
5th May

$$156 \div 6$$



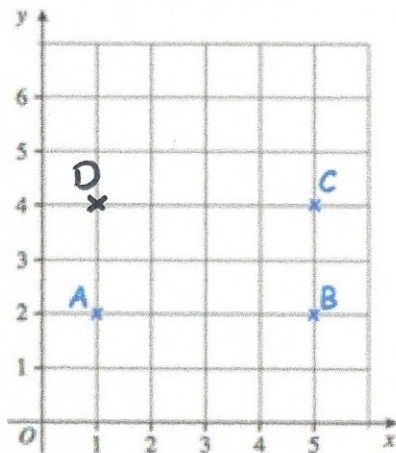
26

$$702 - 56$$



$$\begin{array}{r} 642 \\ - 56 \\ \hline 646 \end{array}$$

646



A, B, C and D are the vertices of a rectangle.

Write down the coordinates of point A

(1, 2)

Plot point D on the grid

(1, 4)

Here is a list of numbers.

15    16    17    18

19    20    21    22

From the list, write down a multiple of 7

21