



1st October

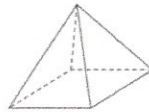
100×100

10,000


$$\begin{array}{r} 047 \\ 7 \overline{) 33249} \end{array}$$

47

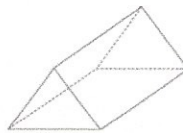
Tick each shape that has more vertices than faces



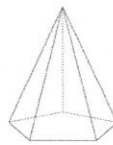
Square-based pyramid



Cuboid



Triangular prism



Pentagonal pyramid

There are green, pink and blue beads in a bag. There are 40 beads altogether.

$\frac{1}{5}$ of the beads are green 8

$\frac{3}{4}$ of the beads are pink 30

How many blue beads are there in the bag?

2