




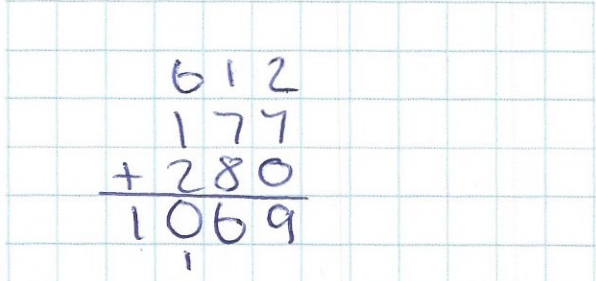
28th September

$24 \times 3 = 2 \times \boxed{36}$



$\boxed{36}$

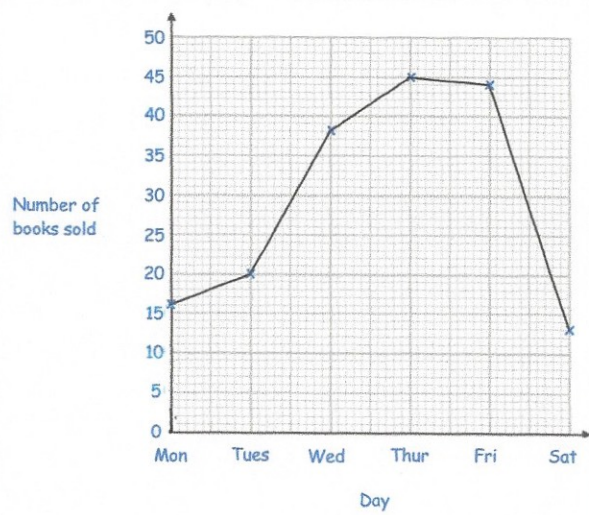
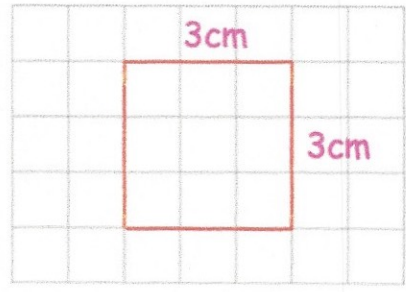
$612 + 177 + 280$



$\boxed{1069}$

Work out the area of this square

$3 \times 3 = 9$
 9cm^2



On which day did the shop sell the most books?

Thursday

How many books were sold on Tuesday?

20