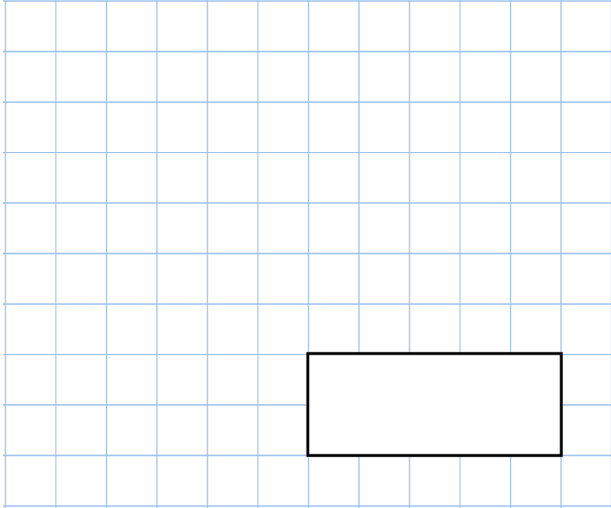


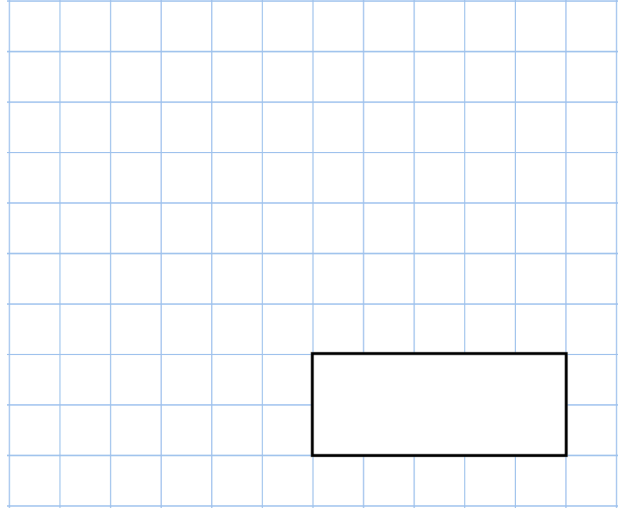


13th November

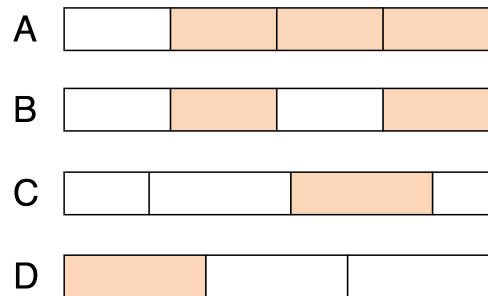
$$1 \times 2 \times 3 \times 4$$



$$240 - 50$$



Which shape is $\frac{3}{4}$ shaded?



George puts these five numbers in their correct place on a number line.

409 398 401 389 395

Write the number **furthest** away from 400

Nikki buys a drink and a sandwich.
The drink cost 90p
She pays with a £5 note.
This is her change.



How much was the sandwich?