



17th October

$24 \div 8$

$$\begin{array}{r} 03 \\ 8 \overline{)24} \end{array}$$

3

$303 + 7$

$$\begin{array}{r} 303 \\ + 7 \\ \hline 310 \end{array}$$

310

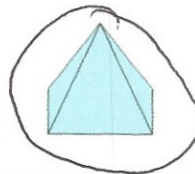
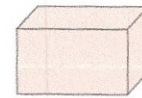
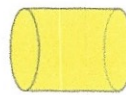
A piece of cake costs £1.70
A drink costs 65p

Work out the total cost

$$\begin{array}{r} 1.70 \\ + 0.65 \\ \hline 2.35 \end{array}$$

£2.35

Circle the shape with 5 vertices



Write 4 in Roman Numerals

IV