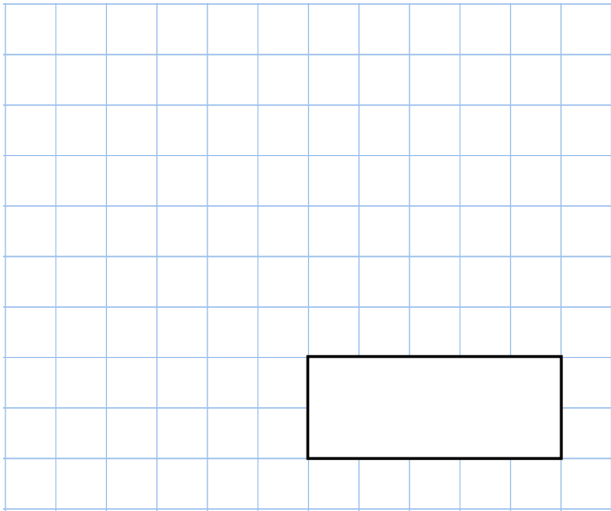


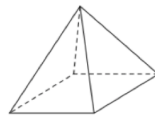


1st October

100×100



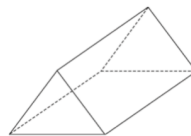
Tick each shape that has more vertices than faces



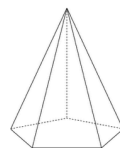
Square-based pyramid



Cuboid



Triangular prism



Pentagonal pyramid

There are green, pink and blue beads in a bag. There are 40 beads altogether.

$\frac{1}{5}$ of the beads are green

$\frac{3}{4}$ of the beads are pink

How many blue beads are there in the bag?