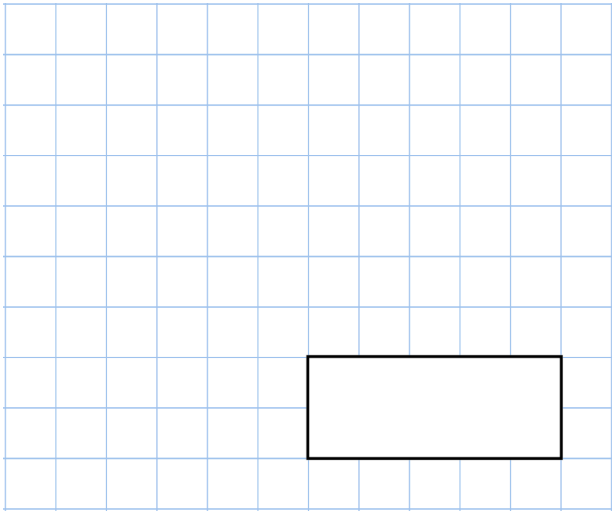


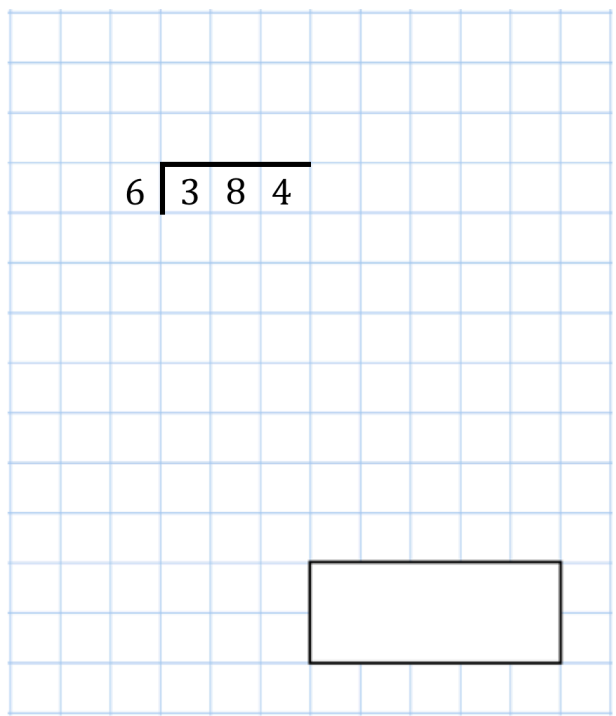


22nd September

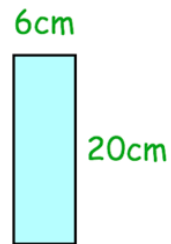
$$\frac{7}{9} - \frac{3}{9}$$



$$6 \overline{) 384}$$



Work out the perimeter of this rectangle



$\frac{1}{12}$ of the cupcakes in a box are lemon

$\frac{4}{12}$ of the cupcakes in the box are strawberry



What fraction of the cupcakes are lemon or strawberry?

Shade 75% of this diagram

