

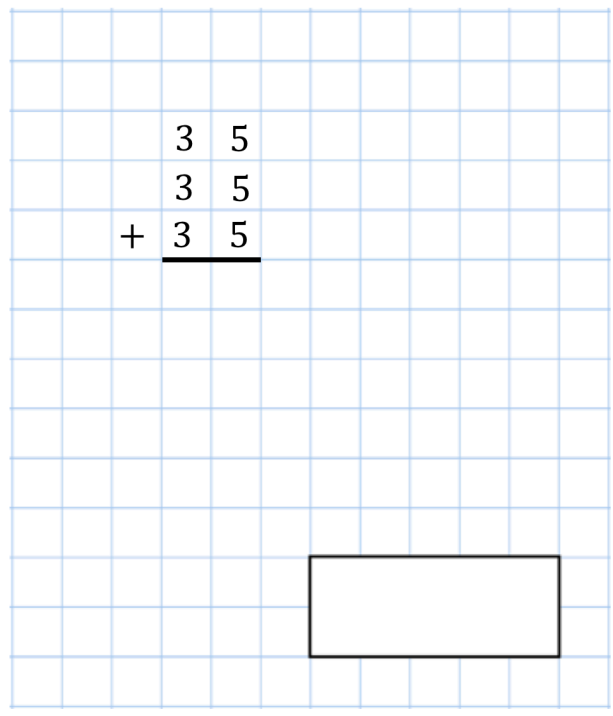


30th September


10×0



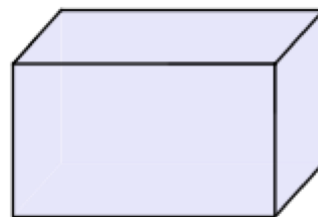
$$\begin{array}{r} 35 \\ 35 \\ + 35 \\ \hline \end{array}$$



How many days are there in October?



How many edges does a cuboid have?



4 pens cost 52p



Find the cost of 1 pen