


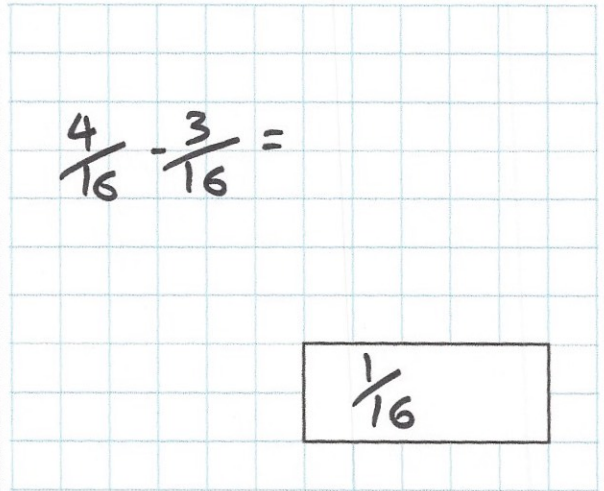
30th October

14^2



196

$\frac{1}{4} - \frac{3}{16}$



$\frac{4}{16} - \frac{3}{16} =$

$\frac{1}{16}$

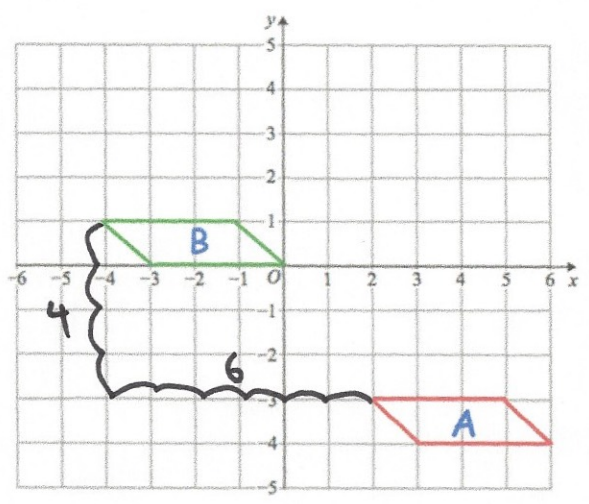
Rhys buys 3 magazines.
 The first magazine cost £4.99
 The second magazine cost £3.45
 The third magazine cost £4.80

He pays with a £20 note. $\pounds 6.76$

Work out how much change Rhys should receive.

total cost $\pounds 13.24$
 $\pounds 20 - \pounds 13.24 = \pounds 6.76$

A parallelogram is translated from position A to position B



Complete the sentence

The parallelogram has moved 6 squares to the left
 and 4 squares up