



20th May

$$805 \div 35$$

$$\begin{array}{r} 23 \\ 35 \overline{) 805} \\ \underline{70} \phantom{0} \\ 105 \\ \underline{105} \\ 0 \end{array}$$

23

$$\frac{9}{10} + \frac{5}{8}$$

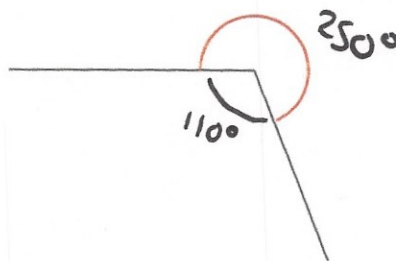
$$\frac{72}{80} + \frac{50}{80} = \frac{122}{80}$$

$$= \frac{61}{40}$$

$1\frac{21}{40}$

Measure this angle

250°

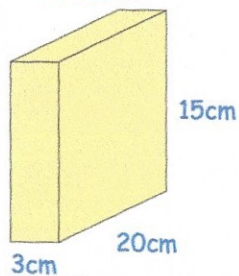


At the end of a film, the year is given in Roman numerals as MMIV

Write the year MMIV in figures.

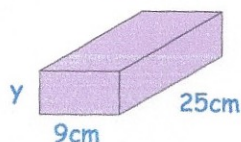
2004

Cuboid A



$$V = 3 \times 20 \times 15 = 900$$

Cuboid B



$$B \text{ has } V = 1800$$

The volume of cuboid A is half the volume of cuboid B.

Find the height of cuboid B, y

$$9 \times 25 = 225$$

$$1800 \div 225 = \underline{8 \text{ cm}}$$