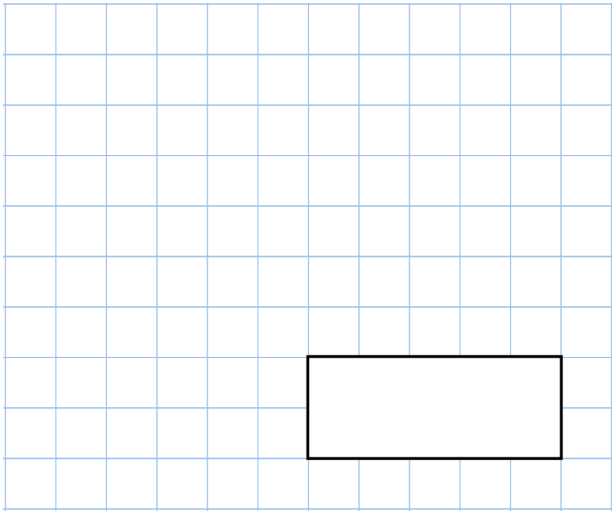

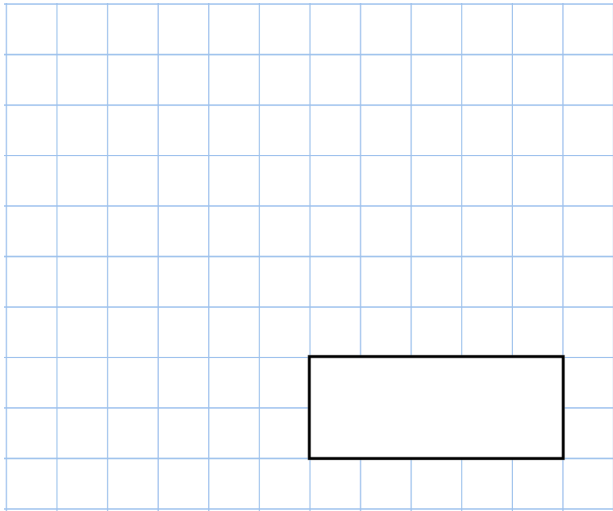




9th November

 25% of 36




 $700 \div 1,000$





How many more people live in England than Scotland and Wales combined?

Country	Population
England	55,128,200
Scotland	5,408,923
Wales	3,113,674

 In a quiz, each correct answer is worth 4 points and each wrong answer is worth -3 points.

A team is asked 10 questions and they answered 3 correctly.

What is the team's final score?



Here is an equilateral triangle.

 Find y
