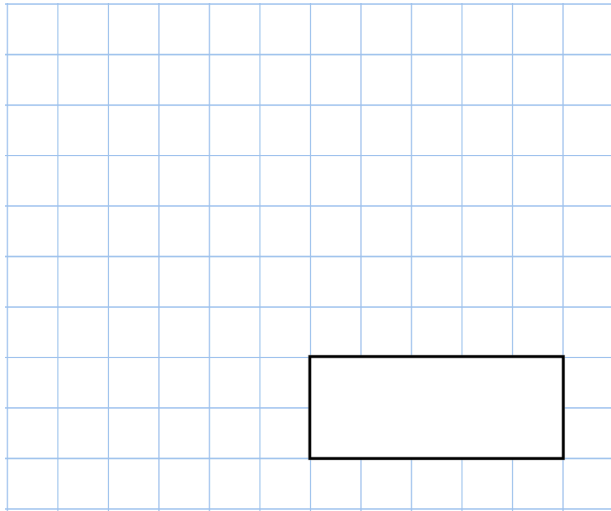


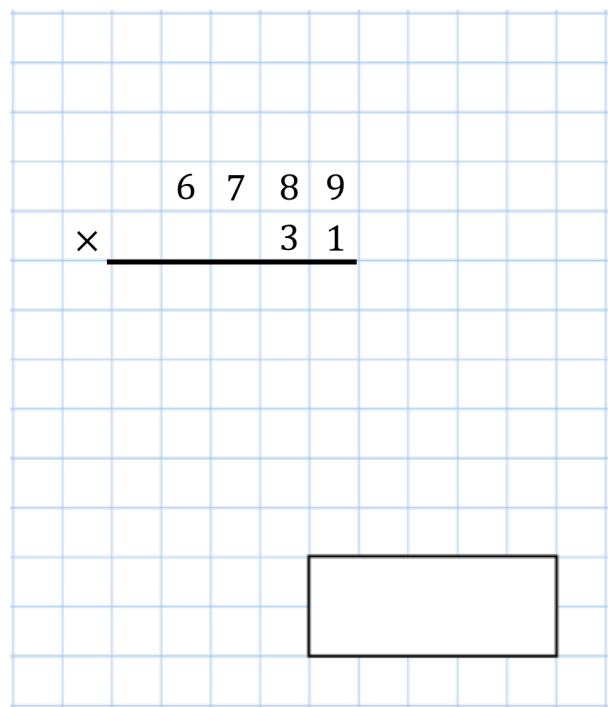


29th November

1.9×46



$$\begin{array}{r} 6 7 8 9 \\ \times 3 1 \\ \hline \end{array}$$



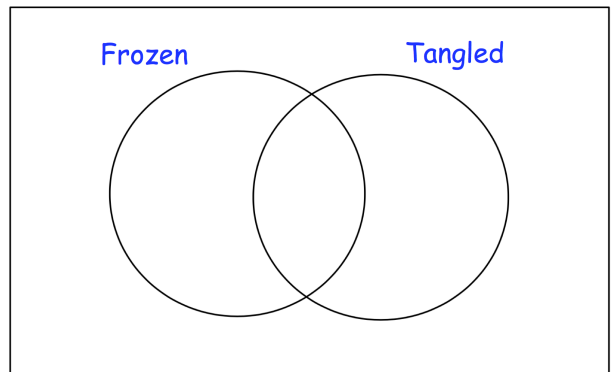
There are 90 children in Year 6.

23 children have watched both the films Frozen and Tangled.

30 children have watched Tangled.

Twice as many children have watched Frozen than Tangled.

How many children have not watched Frozen or Tangled?



The two triangles are identical.

Find the coordinates of point A

