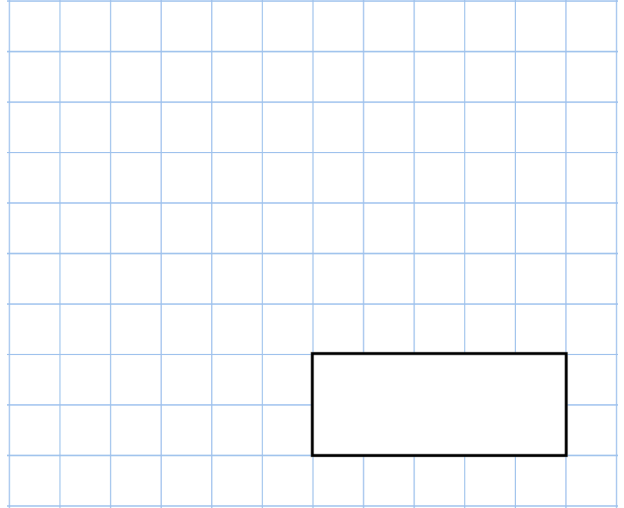
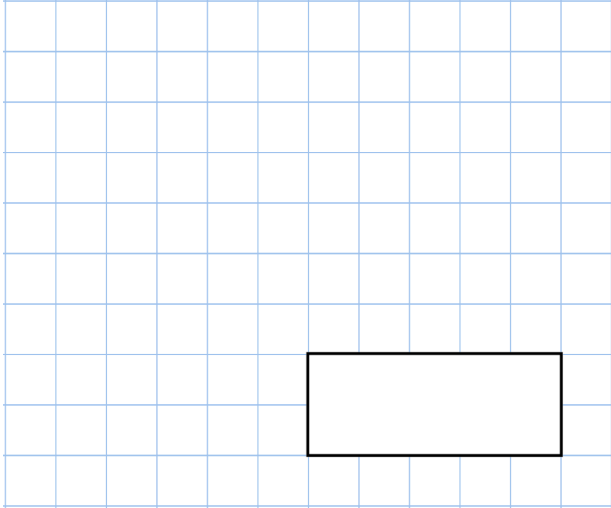




13th October

$$\frac{\square}{\square} = 0.\dot{3}$$

$$12 + 8 \times 13 + 7$$

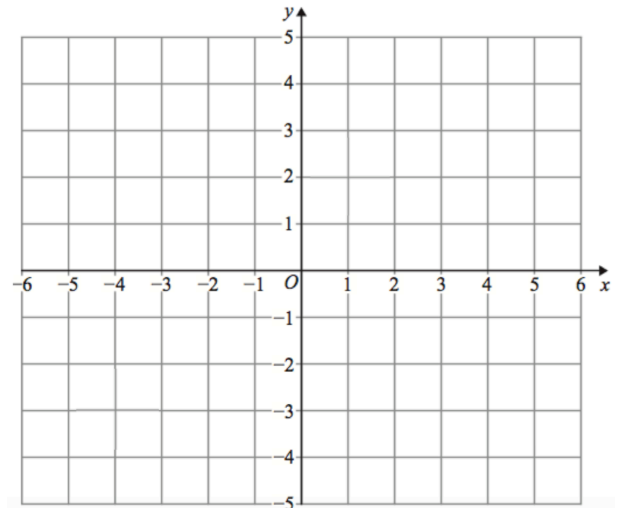


Raheem draws an isosceles triangle on the grid.

Two of the points are

$$(3, -1) \quad (-2, -2)$$

Draw the triangle on the grid



Reflect your triangle in the x-axis.

The cost of making a book can be found using this rule

$$\text{Cost} = \text{number of pages} \times 5\text{p} + 45\text{p for the cover}$$

A book costs £6.05

How many pages does that book have?