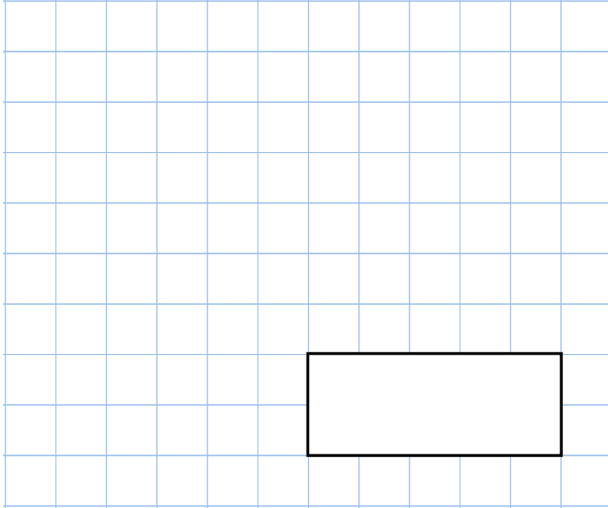


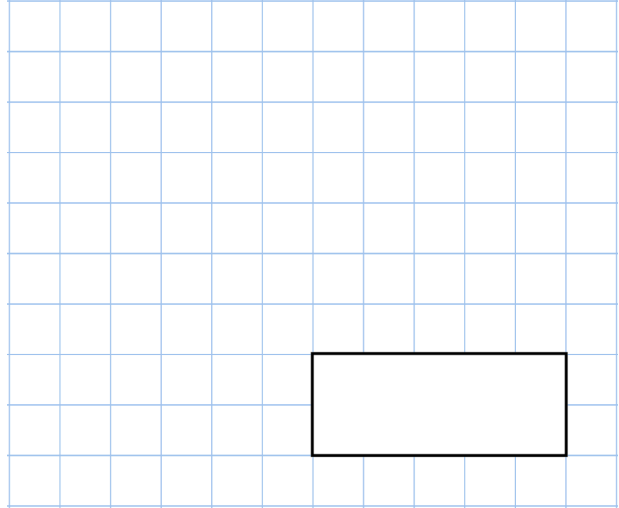


5th April

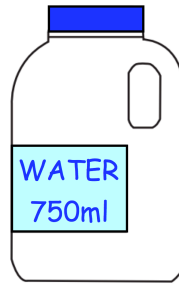
$\frac{1}{2}$  of 16



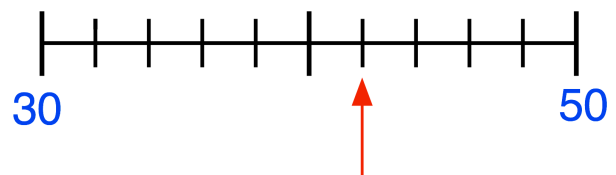
$3 \times 18$



A bottle of water holds 750 millilitres  
200 millilitres of water is poured out  
How much water is left?



What number is the arrow pointing to?



Gianluca, James and Henry run a charity cake sale.

They want to make 42 cupcakes in total

How many cupcakes should each boy make?

