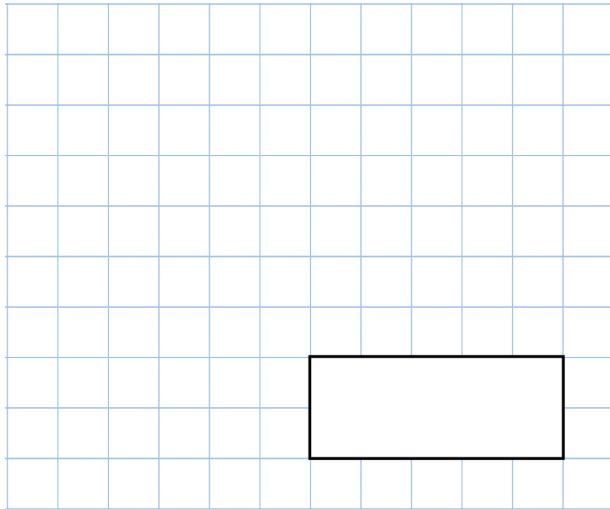




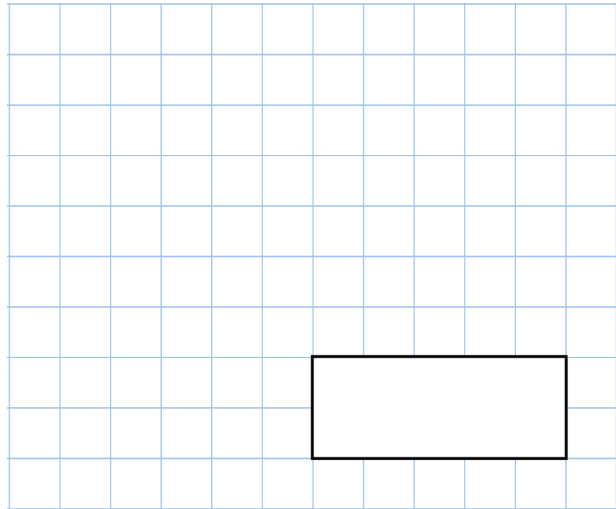
11th August

$34 \div 2$



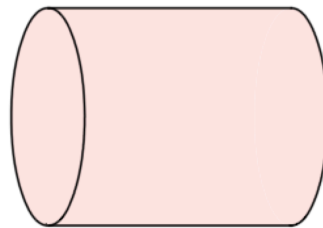
A 10x10 grid with a rectangular box at the bottom center for the answer.

$2 \times 2 \times 3 \times 3$



A 10x10 grid with a rectangular box at the bottom center for the answer.

Name this 3D shape



Alice collected information about the pets her friends owned.

Here are her results

Pet	Number owned
Dog	4
Cat	12
Rabbit	6

The bar chart shows the information from the table

Fill in **all** the missing labels

