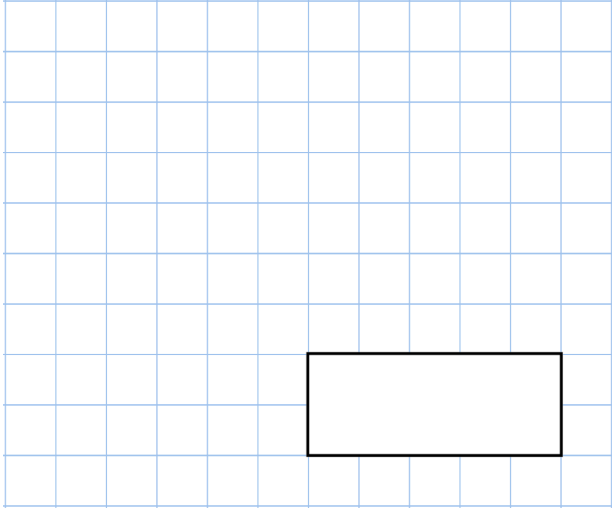


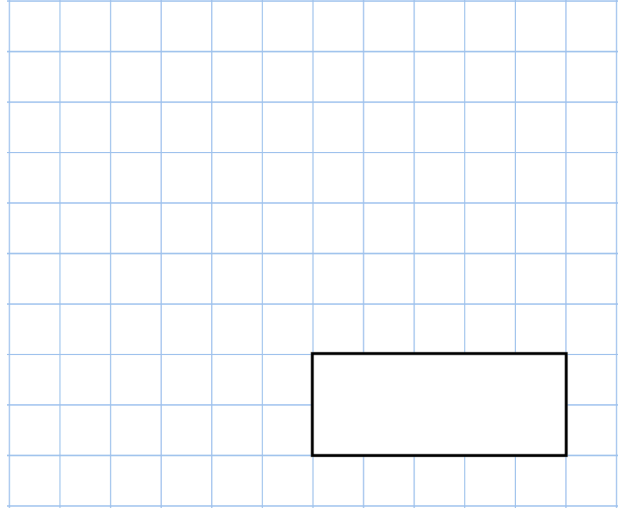


14th August

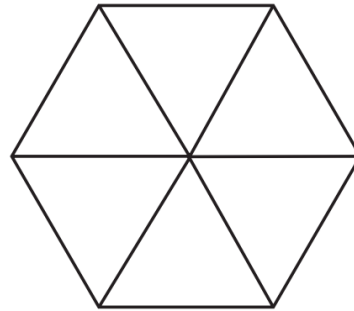
$$2 \times 9 \times 2$$



$$7,005 - 10$$



Shade $\frac{1}{2}$ of the shape



	Hockey	Golf	Cricket
Helen	✓		✓
Leah	✓		
Emily	✓	✓	✓

Which sport does all 3 girls play?

Which girl plays the most sports?

Which girl **does not** play cricket?