



**23rd August**

50×50



$3 \overline{) 72}$

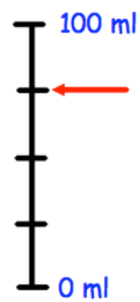


395 people watched a rugby match

Write the number 395 in words

Carl is measuring how much water is in a glass.

How much water is in the glass?



Draw a hexagon