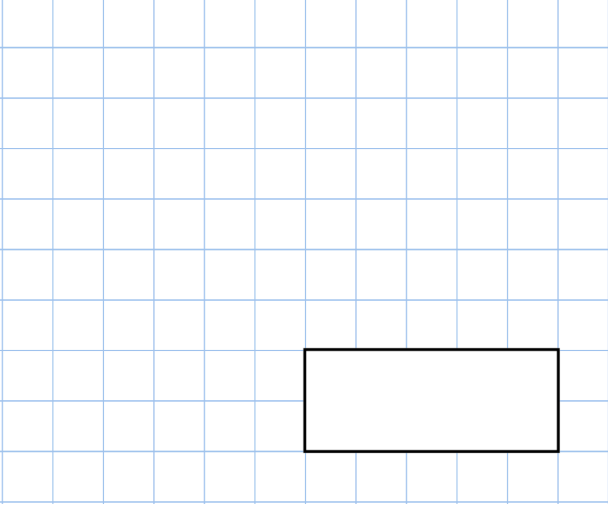
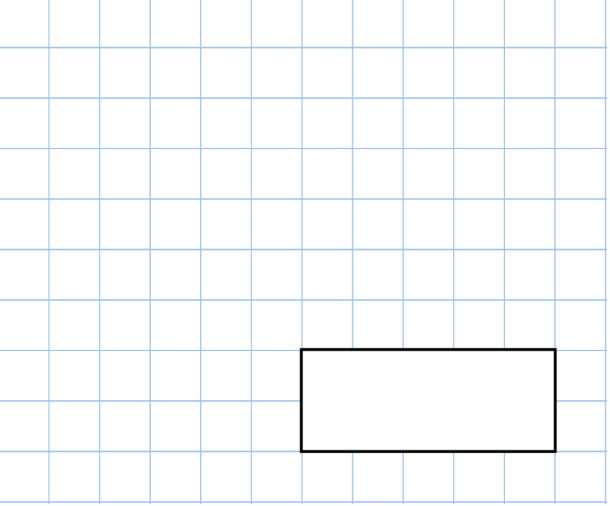
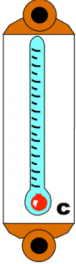




26th August	
<p>5×8</p>  <div style="text-align: right; border: 1px solid black; width: 150px; height: 40px; margin: 0 auto 10px auto;"></div>	<p>$146 + 70$</p>  <div style="text-align: right; border: 1px solid black; width: 150px; height: 40px; margin: 0 auto 10px auto;"></div>
<p>Fill in the missing numbers</p>	$ \begin{array}{r} 5 \quad 4 \\ + \quad 3 \quad \square \\ \hline \square \quad 9 \end{array} $
<p>Arrange these temperatures in order, from lowest to highest</p> <p>5°C 13°C 9°C 3°C</p>	
<p>In the diagram, three circles in a straight line add to 100.</p> <p>Write in the missing numbers.</p>	