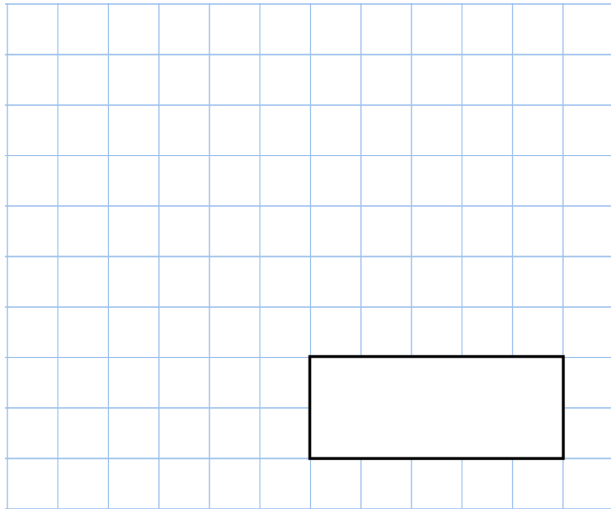


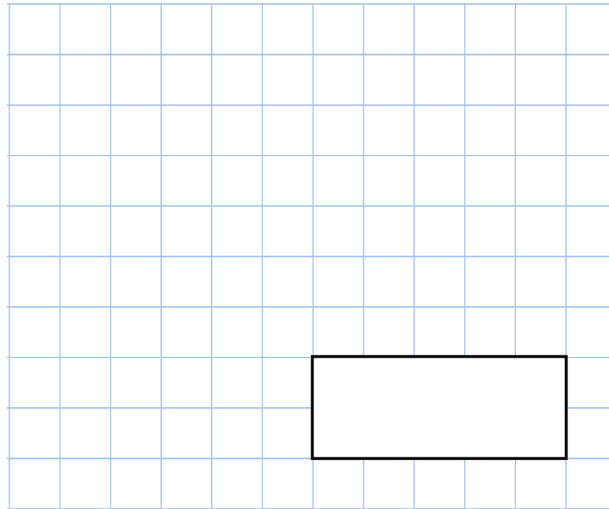


29th December

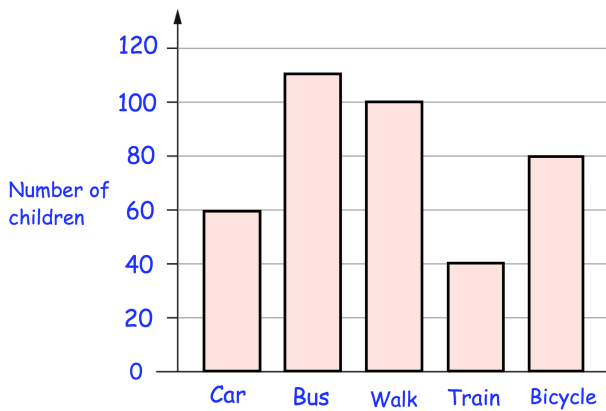
40×5



$56 + 47$



The bar chart shows how children at a primary school travelled to school each morning



How many children travelled to school by **train**?

How many **more** children travelled to school by **bus** than by **car**?

Emma has a bag of 20p coins and Daisy has a bag of 50p coins. Both bags have the same amount of money inside. There are **eight** 50p coins in Daisy's bag.

How many 20p coins are there in Emma's bag?



Emma



Daisy