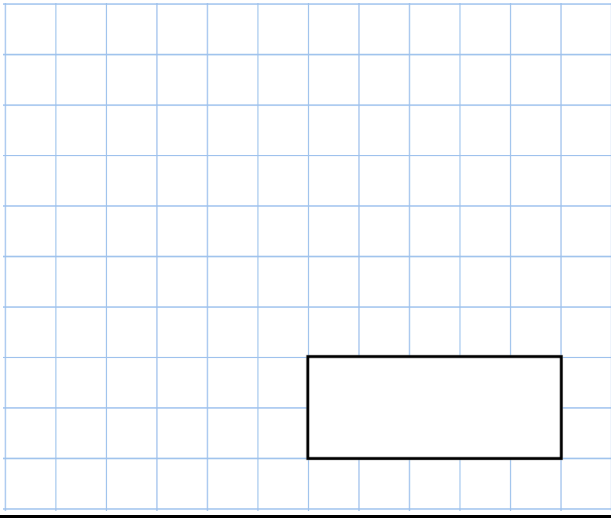
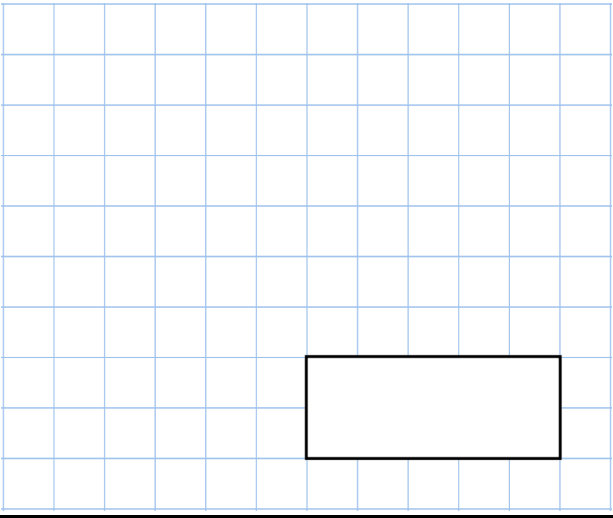

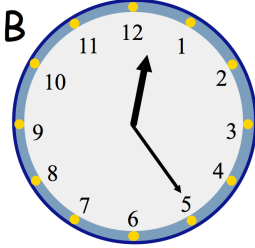
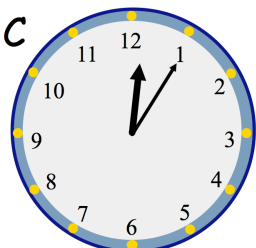
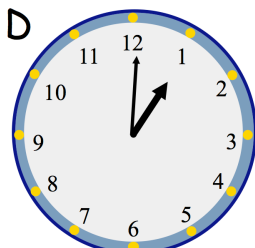



Name: _____

5-a-day

Bronze



1st February	
<p>$505 - 20$</p>  <p style="text-align: center; margin-top: 10px;"></p>	<p>8×7</p>  <p style="text-align: center; margin-top: 10px;"></p>
<p>Which clock face shows five past twelve?</p>	<div style="display: flex; flex-wrap: wrap; justify-content: space-around;"> <div style="text-align: center;"> <p>A</p>  </div> <div style="text-align: center;"> <p>B</p>  </div> </div>
<p>Which clock face shows five o'clock?</p>	<div style="display: flex; flex-wrap: wrap; justify-content: space-around;"> <div style="text-align: center;"> <p>C</p>  </div> <div style="text-align: center;"> <p>D</p>  </div> </div>
<p>Which number comes halfway between 160 and 220</p>	<div style="text-align: center;"> 160 220 </div> <div style="text-align: center; margin-top: 10px;">  </div>