


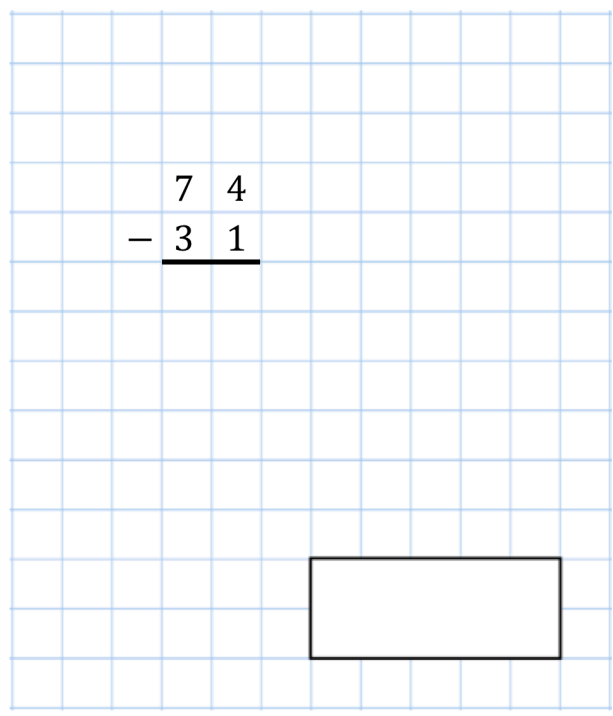


19th February

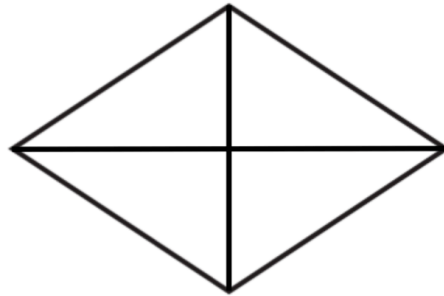
$$20 \times 30$$



$$\begin{array}{r} 74 \\ - 31 \\ \hline \end{array}$$

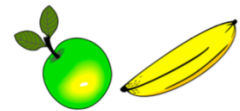


Shade $\frac{3}{4}$ of this shape



Daniel buys an apple for 39p and a banana for 37p

How much does he pay in total?



Robert the Roman has written down some numbers.

X IX XI V

Write the numbers in order, starting with the smallest

