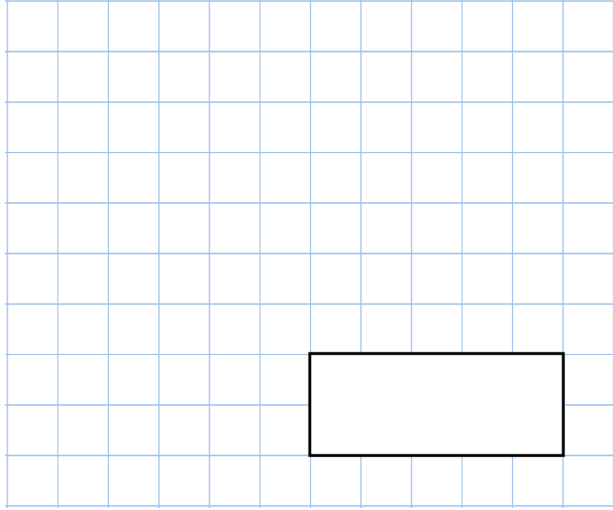
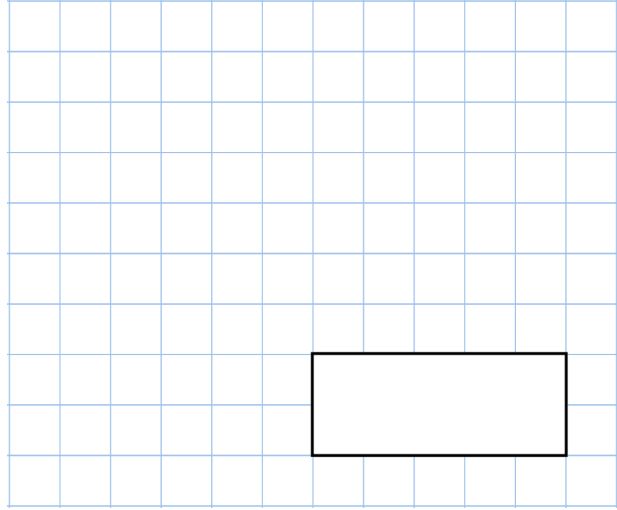


**26th June**

$$12 \times 2 \times 0$$



$$103 \text{ metres} - 20 \text{ metres}$$



A film begins at 4:30pm


The film ends at 6:10pm

How long did the film last?

Bethany puts eight 20p pieces into the piggy bank.

Her mum then puts eight 50p pieces into the piggy bank.

How much money is in the piggy bank?



Jonah has 250 letters to post.

On Monday he posted 90 letters.

On Tuesday he posted 120 letters.

On Wednesday he posted **half of the remaining letters.**

How many letters did Jonah post on Wednesday?