



8th June

Double 51

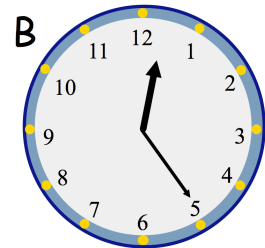
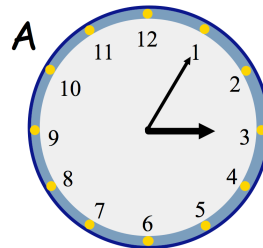
 $5 \times 3 \times 2$

Muhammad is given £8 pocket money each week.

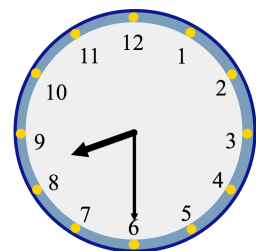
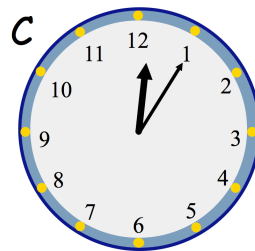
He is saving for a computer game that costs £64.

How many weeks will it take Muhammad to save enough money?

Which clock shows the time Hannah arrives at school in the morning?



D



Which clock shows the time that Hannah finishes school each day?