



1st March

$12 + 89$

--

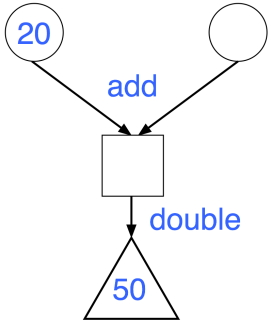
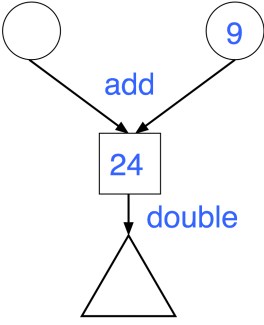
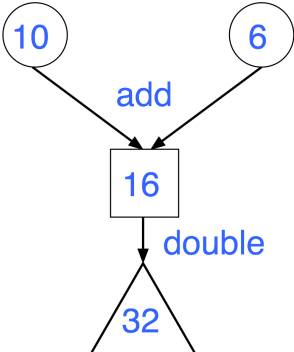
26×4

--

In the diagram, the numbers in the circles add together to make the number in the square.

The number in the triangle is double the number in the square

Complete the two diagrams below



Bradley likes pasta, but not cheese.
Rebecca likes pasta and cheese.
Zainul likes cheese, but not pasta.
Frankie does not like cheese or pasta.

Write the children's names in the correct place.

	likes cheese	does not like cheese
likes pasta		
does not like pasta		