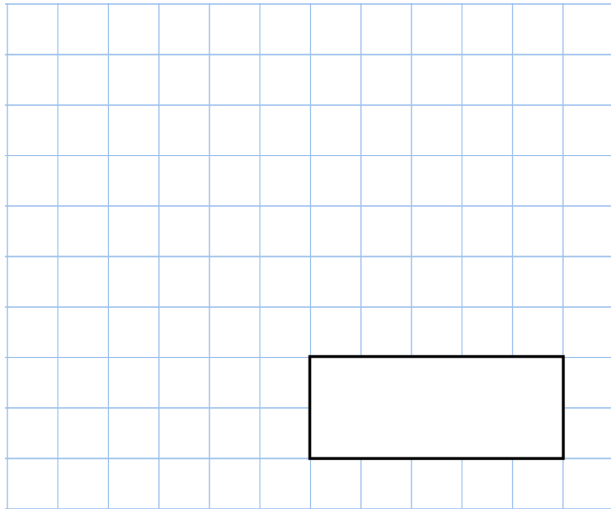


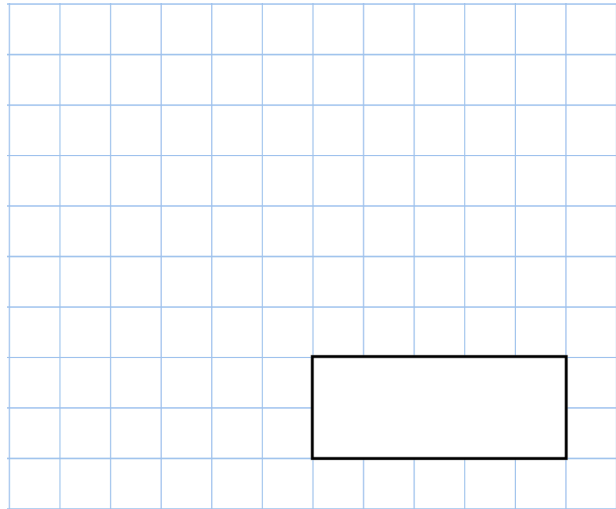


29th March

$40 \div 5$

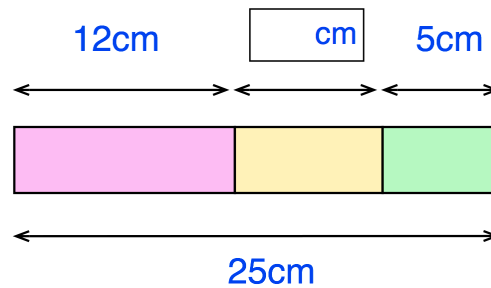


$3 \times 80$



A red block, yellow block and green block are placed in a row.

Find the length of the yellow block



Tilly buys a teddy buy that cost £6.50  
She pays with a £10 note

How much change should she get?



£6.50

Circle the shape that does not have  $\frac{1}{2}$  shaded

