

**22nd May**

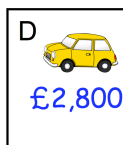
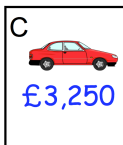
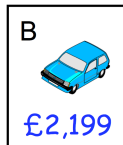

$$40 - 16$$


$$6 \times 10 = 20 \times \square$$


Maddie has a bag of 52 marbles.

$\frac{1}{2}$  of the marbles are green.

How many marbles are green?



Put these cars in order of price, starting with the **highest price**.

Circle the letter below that has parallel lines

**C Z T X S**