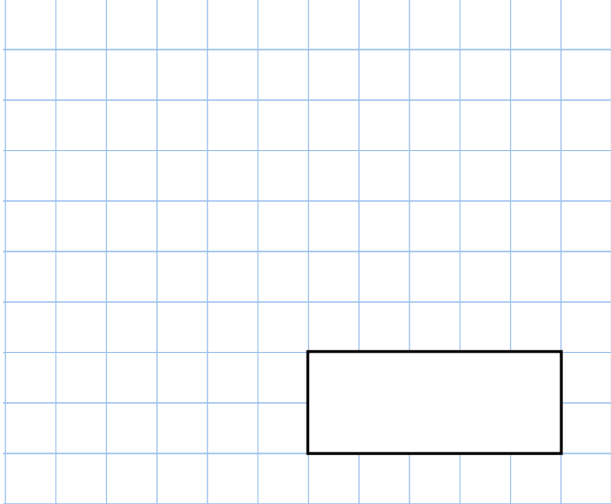
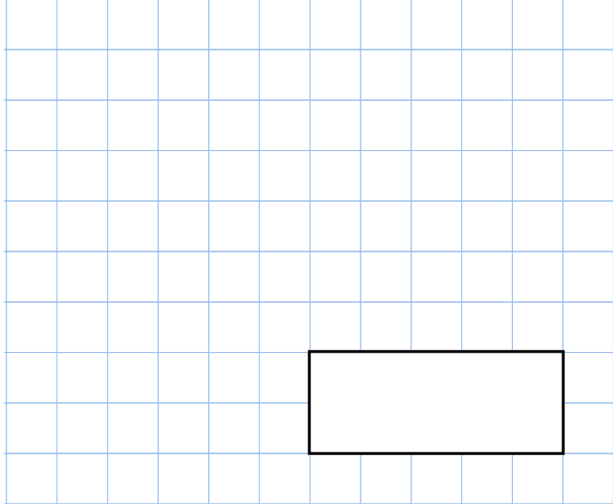
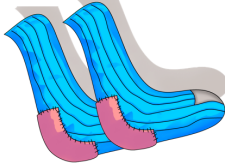


Name: \_\_\_\_\_

5-a-day

Bronze



| 2nd November  |  |
|---|--|
| <p><math>9 \times 5</math></p>   | <p><math>310 - 15</math></p>   |
| <p>Rhys has 26 pairs of socks.<br/>He buys 15 more pairs of socks.</p> <p>How many socks does he have in total?</p>   |    |
| <p>Chloe has £40<br/>Sam has twice as much money as Chloe<br/>Joshua has £30 less than Chloe</p> <p>How much money do they have in total?</p>   |  |
| <p><span style="border: 1px solid black; border-radius: 10px; padding: 5px 15px;">1</span>    <span style="border: 1px solid black; border-radius: 10px; padding: 5px 15px;">3</span>    <span style="border: 1px solid black; border-radius: 10px; padding: 5px 15px;">6</span></p> <p>Using each number card once, make the <b>largest</b> possible even number</p> | <div style="display: flex; justify-content: center; align-items: center; gap: 20px;"><span style="border: 1px solid black; border-radius: 15px; width: 40px; height: 40px; display: inline-block;"></span><span style="border: 1px solid black; border-radius: 15px; width: 40px; height: 40px; display: inline-block;"></span><span style="border: 1px solid black; border-radius: 15px; width: 40px; height: 40px; display: inline-block;"></span></div> |