



7th September

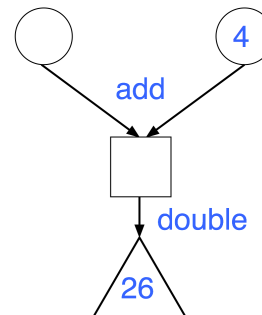
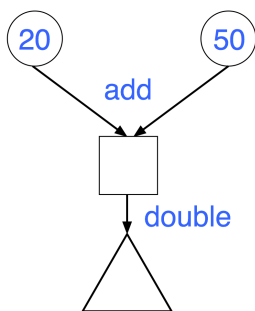
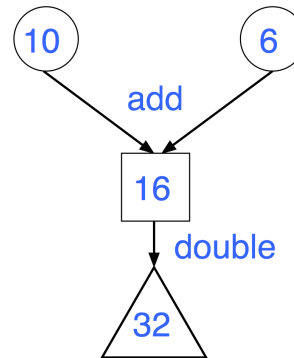
	4	7
+	4	6
	<hr style="width: 50%; margin: 0 auto;"/>	

	2	6
×	4	
	<hr style="width: 50%; margin: 0 auto;"/>	

In the diagram, the numbers in the circles add together to make the number in the square.

The number in the triangle is double the number in the square

Complete the two diagrams below



Name this shape

