



17th April


$0.1 = \frac{\square}{\square}$

Grid for the decimal fraction problem. A rectangular box is provided for the answer.

77×91

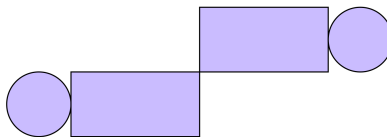
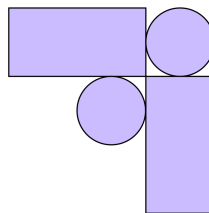
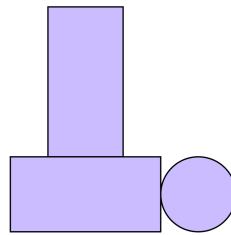
Grid for the multiplication problem. A rectangular box is provided for the answer.

Seb has some rectangular and circular tiles



He makes these patterns with them

For each pattern, put a tick if it has a line of symmetry or a cross if it does not.



Daisy chooses a **cube number**

She rounds it to the nearest hundred.

Her answer is 100.

Write down all the possible prime numbers Daisy could have chosen.